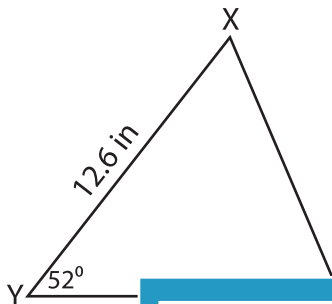


Name : _____

Area of a Triangle

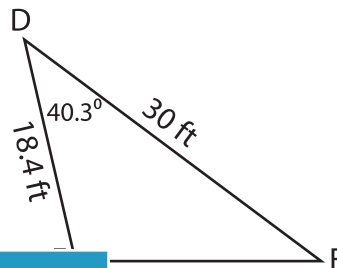
Find the area of each triangle. Round your answer to two decimal places.

1)

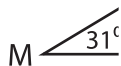


Area = _____

2)



3)



Area = _____

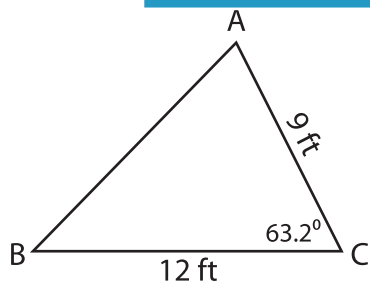
Gain complete access to the largest collection of worksheets in all subjects!

Members, please log in to download this worksheet.

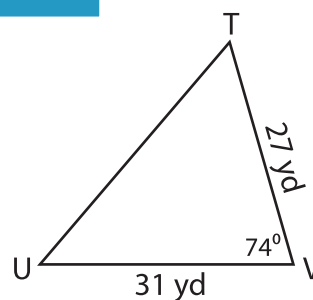
Not a member? Please sign up to gain complete access.

www.mathworksheets4kids.com

5)



Area = _____



Area = _____