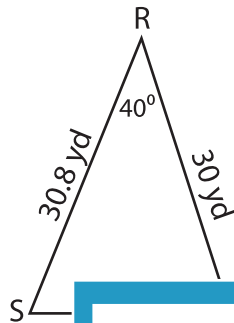


Name : \_\_\_\_\_

# Area of a Triangle

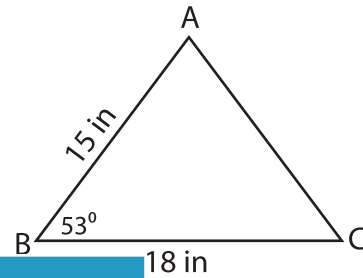
Find the area of each triangle. Round your answer to two decimal places.

1)



Area = \_\_\_\_\_

2)



\_\_\_\_\_

3)



Area = \_\_\_\_\_

**PREVIEW**

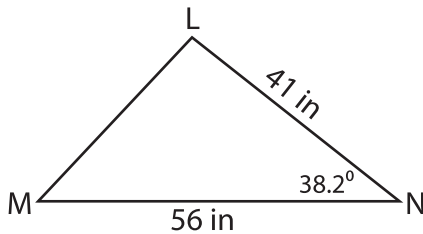
Gain complete access to the largest collection of worksheets in all subjects!

Members, please log in to download this worksheet.

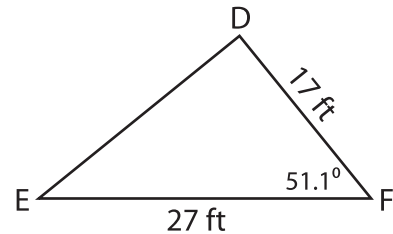
Not a member? Please sign up to gain complete access.

[www.mathworksheets4kids.com](http://www.mathworksheets4kids.com)

5)



Area = \_\_\_\_\_



Area = \_\_\_\_\_