

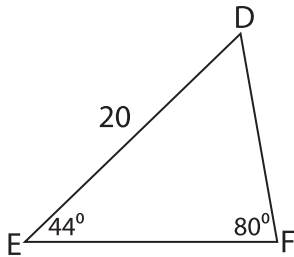
Name : _____

Missing Sides

Sheet 1

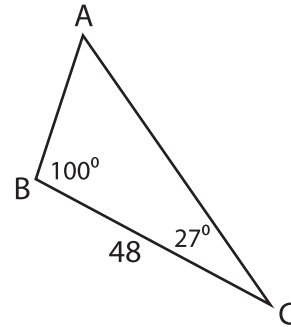
Find the measure of each indicated side. Round your answer to the nearest tenth.

1)



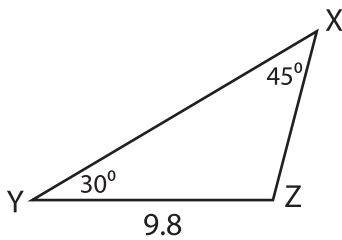
DF = _____

2)



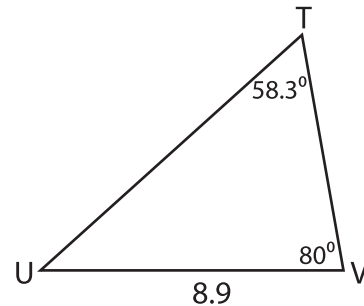
AC = _____

3)



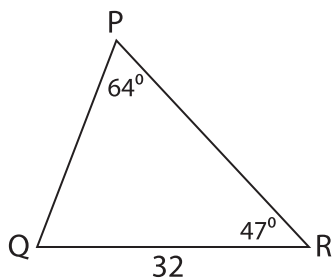
XZ = _____

4)



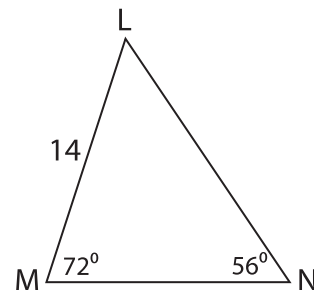
TV = _____

5)



PQ = _____

6)



MN = _____