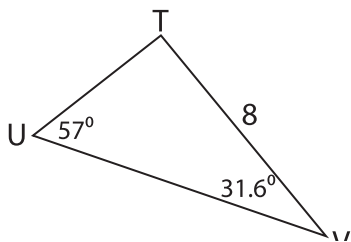


# Missing Sides

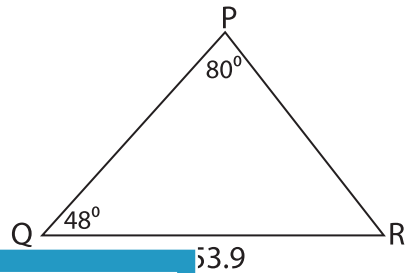
Find the measure of each indicated side. Round your answer to the nearest tenth.

1)



UV = \_\_\_\_\_

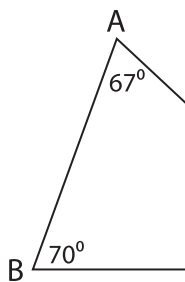
2)



53.9

\_\_\_\_\_

3)



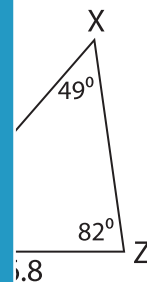
BC = \_\_\_\_\_

Gain complete access to the largest collection of worksheets in all subjects!

Members, please log in to download this worksheet.

Not a member? Please sign up to gain complete access.

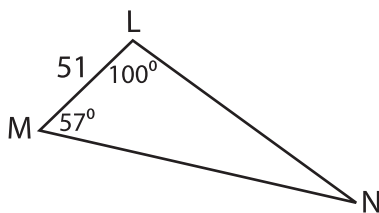
[www.mathworksheets4kids.com](http://www.mathworksheets4kids.com)



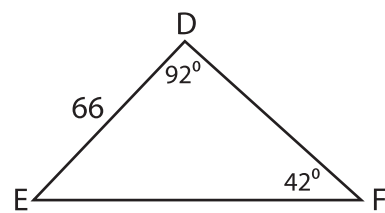
6.8

\_\_\_\_\_

5)



LN = \_\_\_\_\_



DF = \_\_\_\_\_