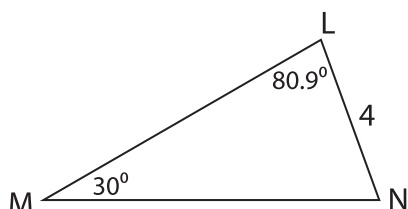


## Missing Sides

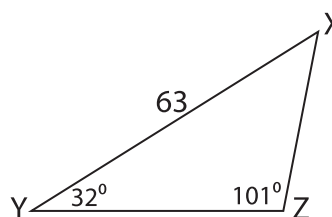
Find the measure of each indicated side. Round your answer to the nearest tenth.

1)

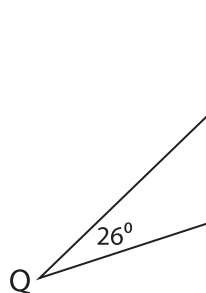


MN = \_\_\_\_\_

2)



3)



QR = \_\_\_\_\_

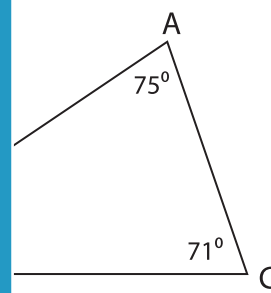
**PREVIEW**

Gain complete access to the largest  
collection of worksheets in all subjects!

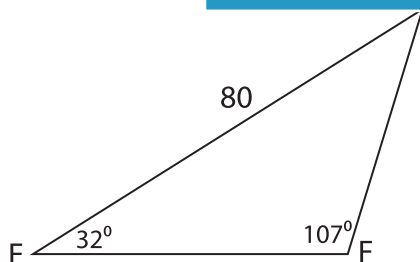
Members, please  
log in to  
download this  
worksheet.

Not a member?  
Please sign up to  
gain complete  
access.

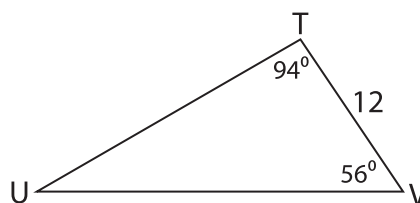
[www.mathworksheets4kids.com](http://www.mathworksheets4kids.com)



5)



EF = \_\_\_\_\_



UV = \_\_\_\_\_