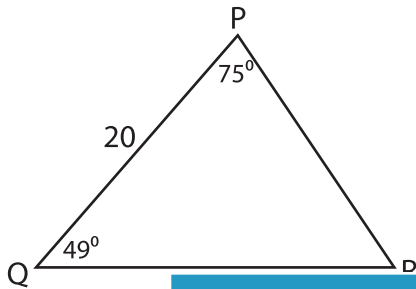


Missing Sides and Angles

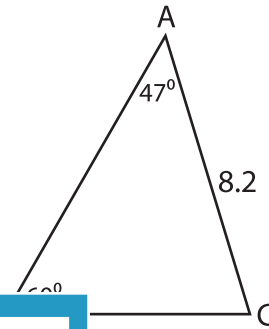
Find the measure of each indicated side or angle. Round your answer to the nearest tenth.

1)



PR = _____

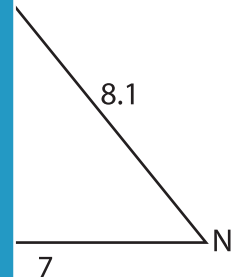
2)



3)



$m\angle T =$ _____



PREVIEW

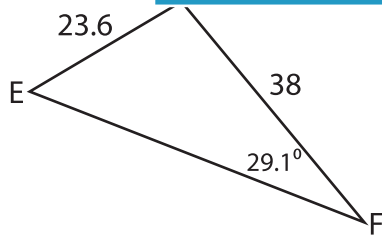
Gain complete access to the largest collection of worksheets in all subjects!

Members, please log in to download this worksheet.

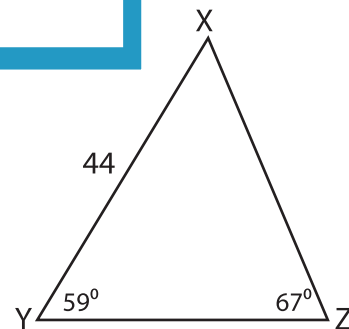
Not a member? Please sign up to gain complete access.

www.mathworksheets4kids.com

5)



$m\angle D =$ _____



XZ = _____