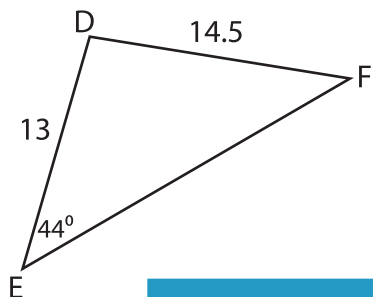


## Missing Sides and Angles

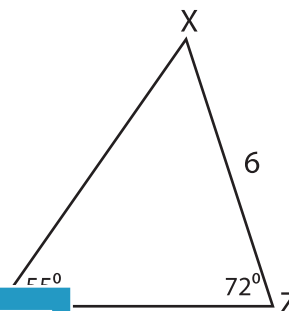
Find the measure of each indicated side or angle. Round your answer to the nearest tenth.

1)



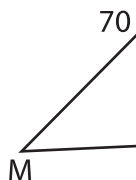
$m\angle D =$  \_\_\_\_\_

2)

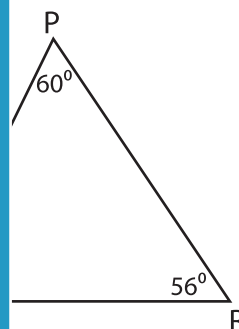


\_\_\_\_\_

3)

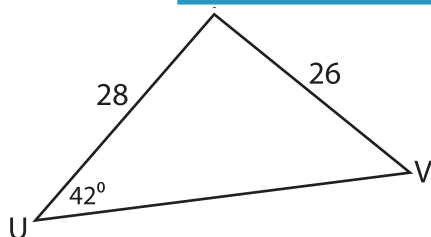


$m\angle M =$  \_\_\_\_\_

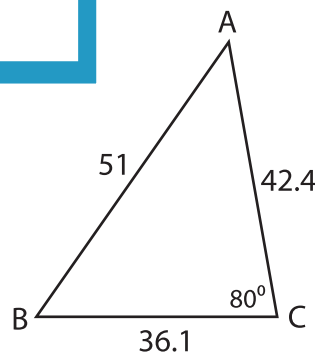


\_\_\_\_\_

5)



$UV =$  \_\_\_\_\_



$m\angle B =$  \_\_\_\_\_

# PREVIEW

Gain complete access to the largest collection of worksheets in all subjects!

Members, please log in to download this worksheet.

Not a member? Please sign up to gain complete access.

[www.mathworksheets4kids.com](http://www.mathworksheets4kids.com)