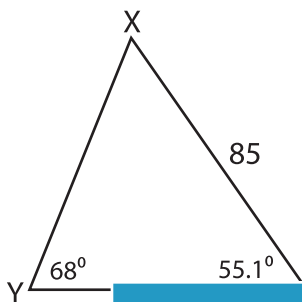


Missing Sides and Angles

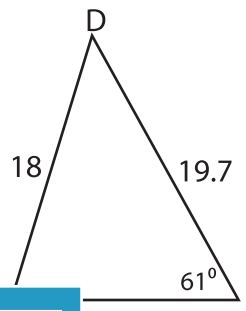
Find the measure of each indicated side or angle. Round your answer to the nearest tenth.

1)

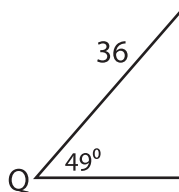


YZ = _____

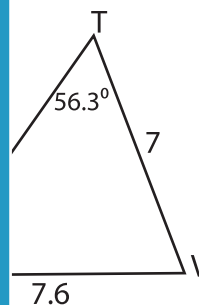
2)



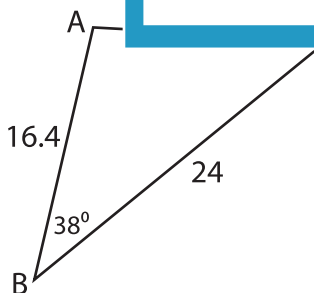
3)



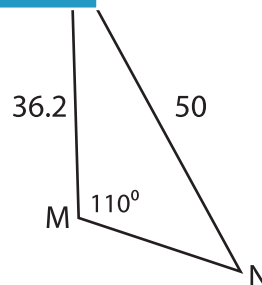
QR = _____



5)



$m\angle A =$ _____



MN = _____

PREVIEW

Gain complete access to the largest collection of worksheets in all subjects!

Members, please log in to download this worksheet.

Not a member? Please sign up to gain complete access.

www.mathworksheets4kids.com