

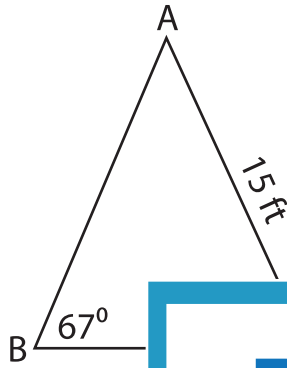
Name : _____

Solving Triangles

T1S1

Solve each triangle from the given measurements. Round your answer to the nearest tenth.

1)

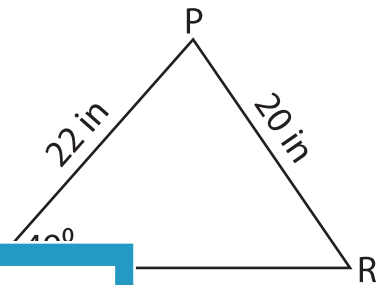


$m\angle A =$ _____

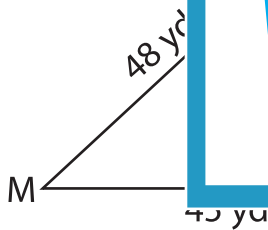
$a =$ _____

$c =$ _____

2)



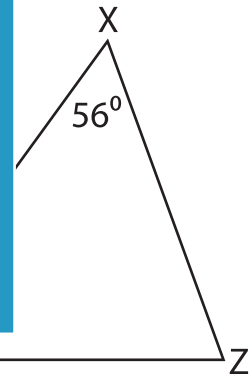
3)



$m\angle L =$ _____

$m\angle M =$ _____

$m =$ _____



$m\angle Z =$ _____

$x =$ _____

$y =$ _____

PREVIEW

Gain complete access to the largest collection of worksheets in all subjects!

Members, please log in to download this worksheet.

Not a member? Please sign up to gain complete access.

www.mathworksheets4kids.com