

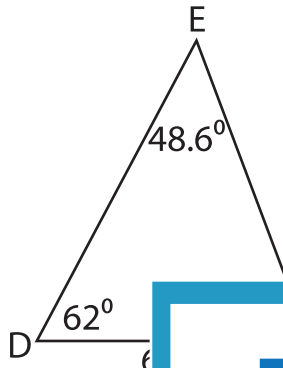
Name : \_\_\_\_\_

T1S3

## Solving Triangles

Solve each triangle from the given measurements. Round your answer to the nearest tenth.

1)

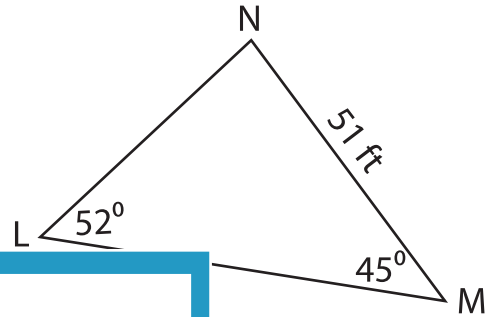


$m\angle F =$  \_\_\_\_\_

$d =$  \_\_\_\_\_

$f =$  \_\_\_\_\_

2)



# PREVIEW

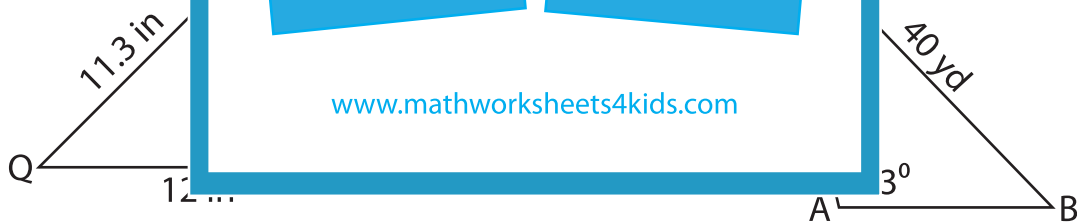
Gain complete access to the largest collection of worksheets in all subjects!

Members, please log in to download this worksheet.

Not a member? Please sign up to gain complete access.

[www.mathworksheets4kids.com](http://www.mathworksheets4kids.com)

3)



$m\angle R =$  \_\_\_\_\_

$m\angle B =$  \_\_\_\_\_

$m\angle Q =$  \_\_\_\_\_

$m\angle C =$  \_\_\_\_\_

$q =$  \_\_\_\_\_

$c =$  \_\_\_\_\_