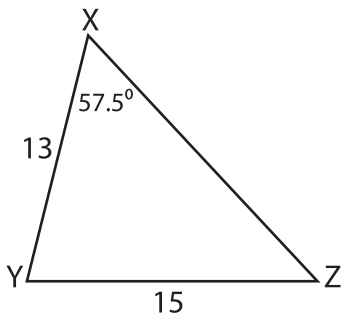


Name : \_\_\_\_\_

# Unknown Angles

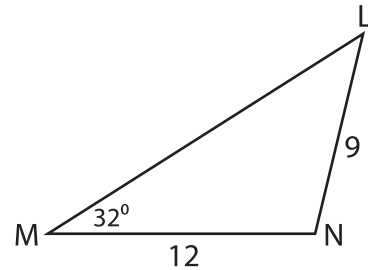
Find the measure of each indicated angle. Round your answer to the nearest tenth.

1)



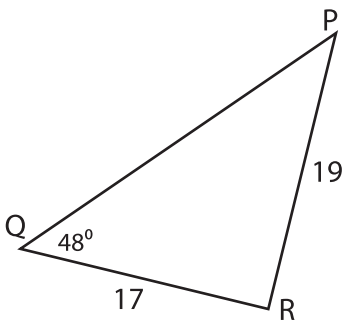
$m\angle Z =$  \_\_\_\_\_

2)



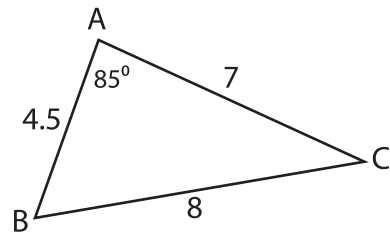
$m\angle N =$  \_\_\_\_\_

3)



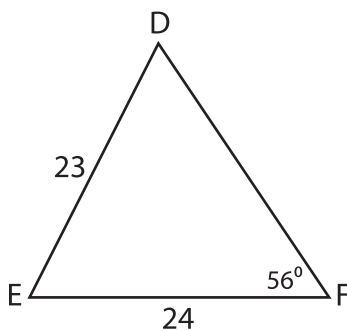
$m\angle R =$  \_\_\_\_\_

4)



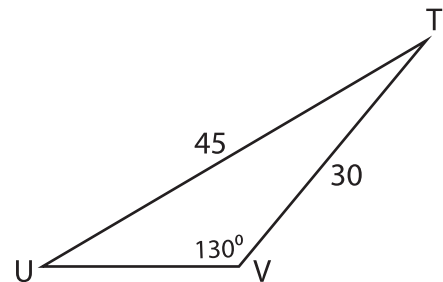
$m\angle B =$  \_\_\_\_\_

5)



$m\angle D =$  \_\_\_\_\_

6)



$m\angle U =$  \_\_\_\_\_