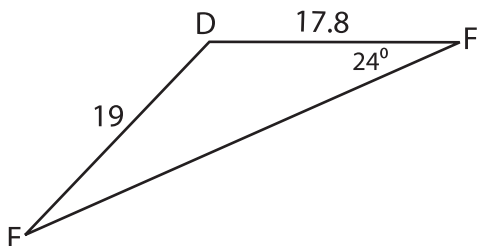


# Unknown Angles

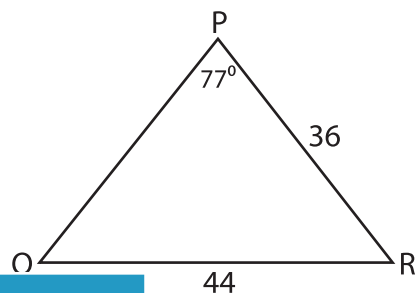
Find the measure of each indicated angle. Round your answer to the nearest tenth.

1)



$m\angle E =$  \_\_\_\_\_

2)



\_\_\_\_\_

3)

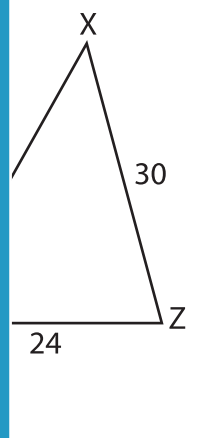
## PREVIEW

Gain complete access to the largest collection of worksheets in all subjects!

Members, please log in to download this worksheet.

Not a member? Please sign up to gain complete access.

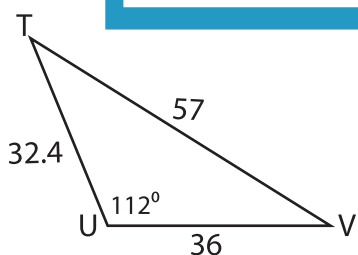
[www.mathworksheets4kids.com](http://www.mathworksheets4kids.com)



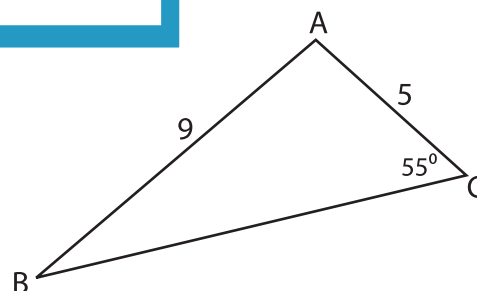
$m\angle M =$  \_\_\_\_\_

$m\angle L =$  \_\_\_\_\_

5)



$m\angle T =$  \_\_\_\_\_



$m\angle A =$  \_\_\_\_\_