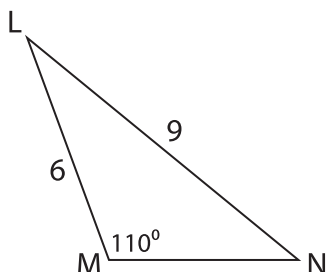


Unknown Angles

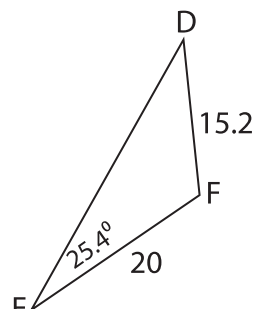
Find the measure of each indicated angle. Round your answer to the nearest tenth.

1)

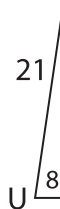


$m\angle L =$ _____


2)



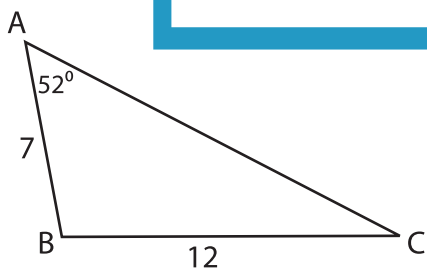
3)



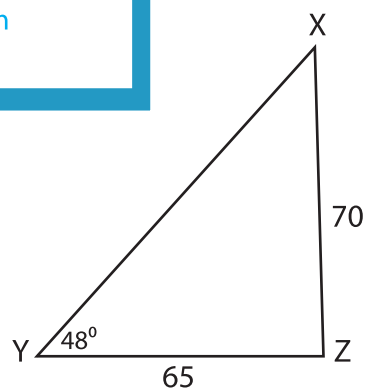
$m\angle V =$ _____



5)



$m\angle B =$ _____



$m\angle X =$ _____

PREVIEW

Gain complete access to the largest collection of worksheets in all subjects!

Members, please log in to download this worksheet.

Not a member? Please sign up to gain complete access.

www.mathworksheets4kids.com