

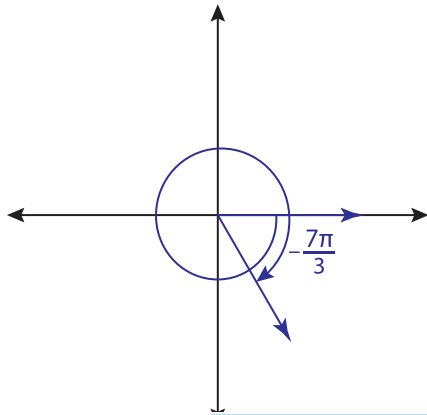
Name : \_\_\_\_\_

## Coterminal Angles - Radians

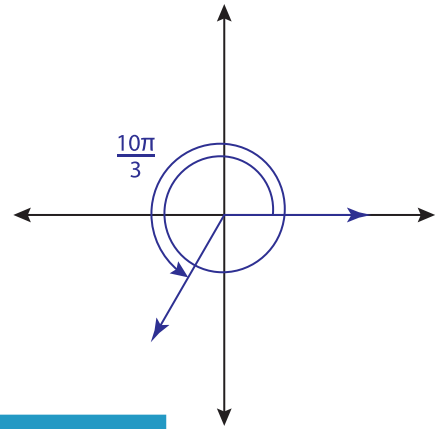
Sheet 1

Find the coterminal angle between 0 and  $2\pi$  for each angle.

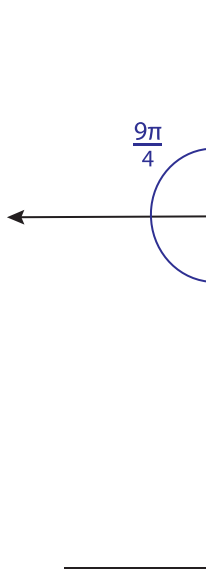
1)



2)



3)



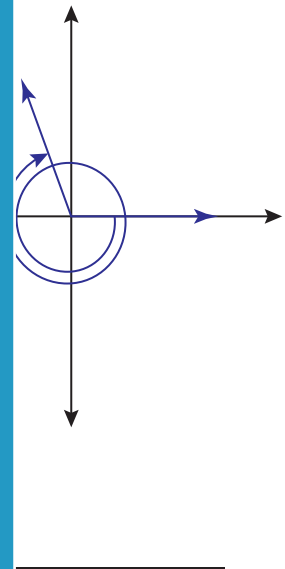
**PREVIEW**

Gain complete access to the largest collection of worksheets in all subjects!

Members, please log in to download this worksheet.

Not a member? Please sign up to gain complete access.

[www.mathworksheets4kids.com](http://www.mathworksheets4kids.com)



5)

$$-\frac{19\pi}{18}$$

6)

$$\frac{\pi}{2}$$

7)

$$-\frac{3\pi}{20}$$