

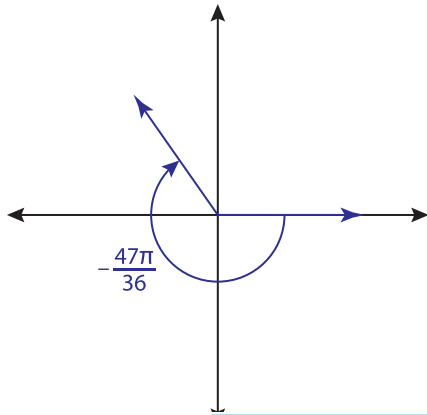
Name : _____

Coterminal Angles - Radians

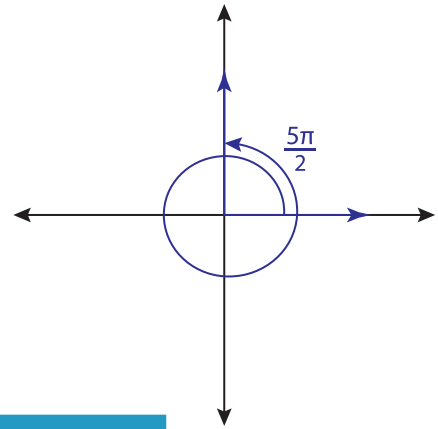
Sheet 3

Find the coterminal angle between 0 and 2π for each angle.

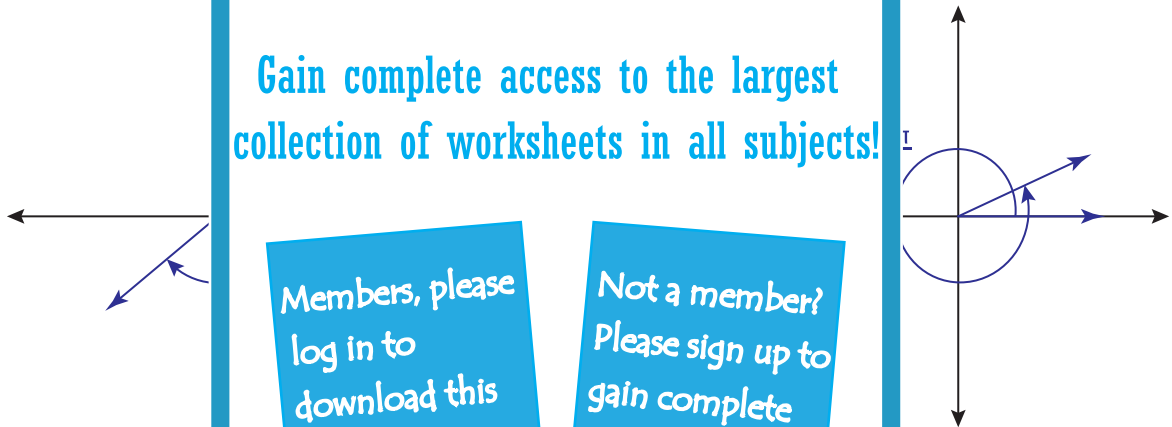
1)



2)



3)



PREVIEW

Gain complete access to the largest collection of worksheets in all subjects!

Members, please log in to download this worksheet.

Not a member? Please sign up to gain complete access.

www.mathworksheets4kids.com

5)

$-\frac{5\pi}{3}$

6)

$\frac{5\pi}{18}$

7)

$-\frac{2\pi}{9}$