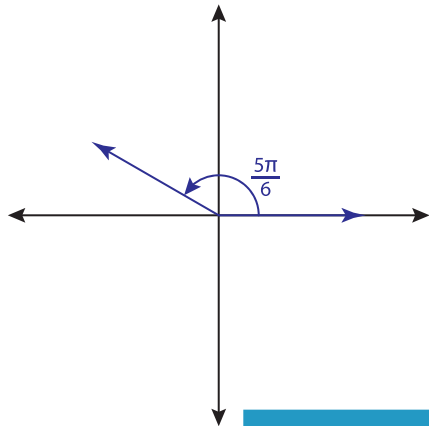


Positive and Negative Coterminal Angles

Find the positive and negative coterminal angles for each indicated angle. Show them on the coordinate plane.

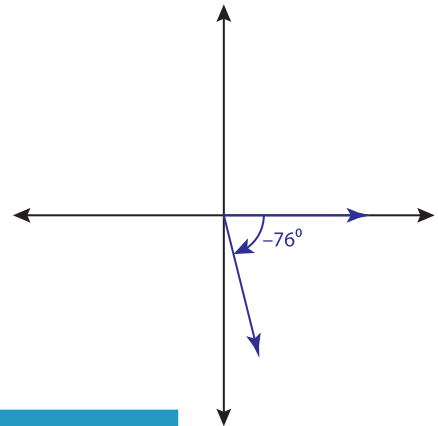
1)



Positive coterminal angle: _____

Negative coterminal angle: _____

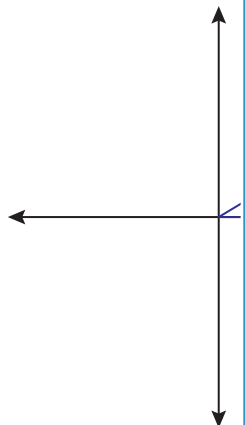
2)



Positive coterminal angle: _____

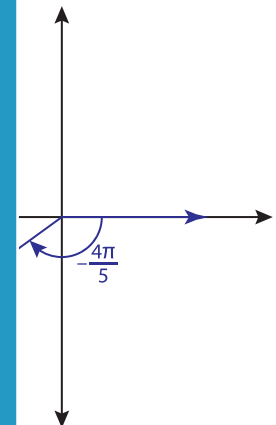
Negative coterminal angle: _____

3)



Positive coterminal angle: _____

Negative coterminal angle: _____



Positive coterminal angle: _____

Negative coterminal angle: _____

PREVIEW

Gain complete access to the largest collection of worksheets in all subjects!

Members, please log in to download this worksheet.

Not a member? Please sign up to gain complete access.

www.mathworksheets4kids.com

5) -315°

Positive coterminal angle: _____

Negative coterminal angle: _____

6) $\frac{58\pi}{45}$

Positive coterminal angle: _____

Negative coterminal angle: _____