

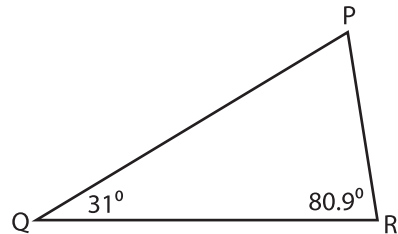
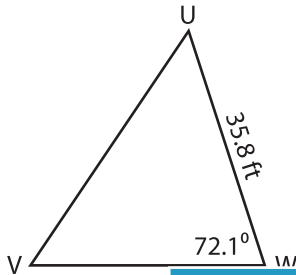
Name : _____

Solving Triangles

Solve each triangle from the given measurements. Round your answer to the nearest tenth.

1) Area = 579.14 ft²

2) Area = 951.03 in²



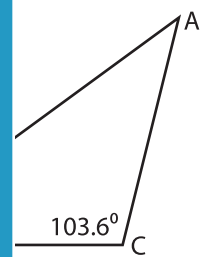
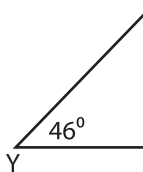
$m\angle U =$ _____

$m\angle V =$ _____

$u =$ _____

$w =$ _____

3) Area = 228.2 _____ ft²



$m\angle Z =$ _____

$x =$ _____

$y =$ _____

$z =$ _____

$m\angle A =$ _____

$m\angle B =$ _____

$b =$ _____

$c =$ _____

PREVIEW

Gain complete access to the largest collection of worksheets in all subjects!

Members, please log in to download this worksheet.

Not a member? Please sign up to gain complete access.

www.mathworksheets4kids.com