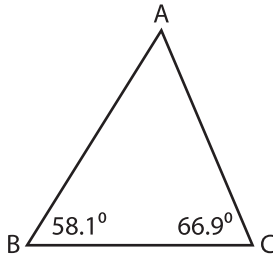


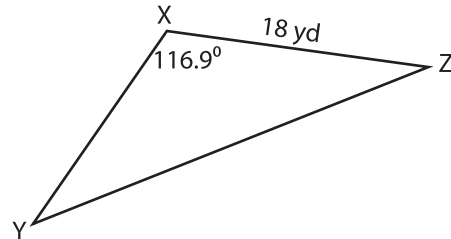
Solving Triangles

Solve each triangle from the given measurements. Round your answer to the nearest tenth.

1) Area = 426.45 in²



2) Area = 128.42 yd²



$m\angle A =$ _____

$a =$ _____

$b =$ _____

$c =$ _____

PREVIEW

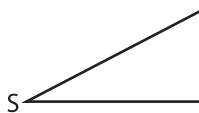
Gain complete access to the largest collection of worksheets in all subjects!

Members, please log in to download this worksheet.

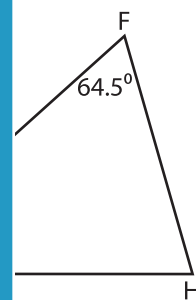
Not a member? Please sign up to gain complete access.

www.mathworksheets4kids.com

3) Area = 580.3 in²



in²



$m\angle R =$ _____

$m\angle H =$ _____

$m\angle S =$ _____

$f =$ _____

$r =$ _____

$g =$ _____

$t =$ _____

$h =$ _____