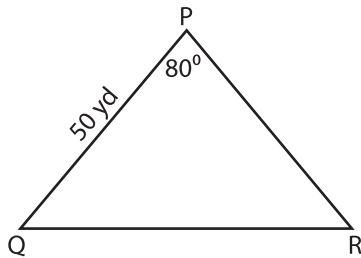


Name : \_\_\_\_\_

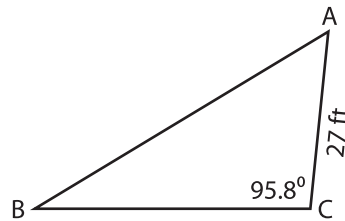
# Solving Triangles

Solve each triangle from the given measurements. Round your answer to the nearest tenth.

1) Area = 1,231 yd<sup>2</sup>



2) Area = 561.37 ft<sup>2</sup>



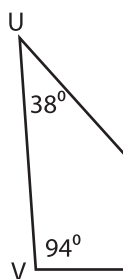
$m\angle Q =$  \_\_\_\_\_

$m\angle R =$  \_\_\_\_\_

$p =$  \_\_\_\_\_

$q =$  \_\_\_\_\_

3) Area = 749.7 yd<sup>2</sup>



$m\angle W =$  \_\_\_\_\_

$u =$  \_\_\_\_\_

$v =$  \_\_\_\_\_

$w =$  \_\_\_\_\_

$m\angle X =$  \_\_\_\_\_

$x =$  \_\_\_\_\_

$y =$  \_\_\_\_\_

$z =$  \_\_\_\_\_

**PREVIEW**

Gain complete access to the largest collection of worksheets in all subjects!

Members, please log in to download this worksheet.

Not a member? Please sign up to gain complete access.

[www.mathworksheets4kids.com](http://www.mathworksheets4kids.com)