

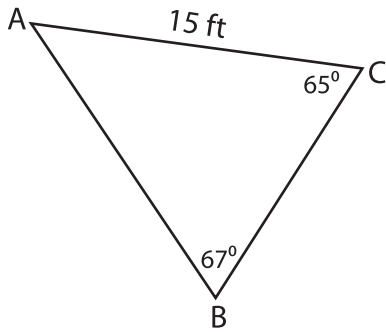
Name : _____

Solving Triangles

T1S1

Solve each triangle from the given measurements. Round your answer to the nearest tenth.

1)

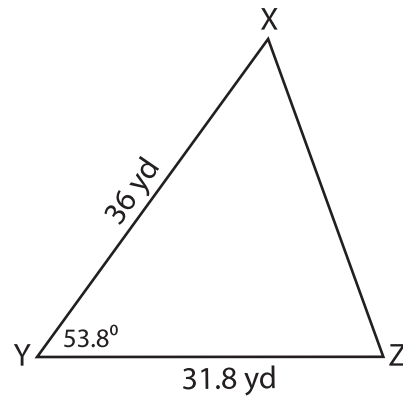


$m\angle A =$ _____

$a =$ _____

$c =$ _____

2)

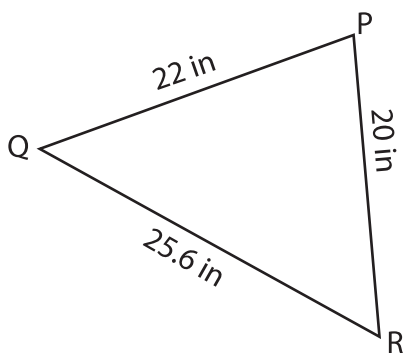


$m\angle X =$ _____

$m\angle Z =$ _____

$y =$ _____

3)

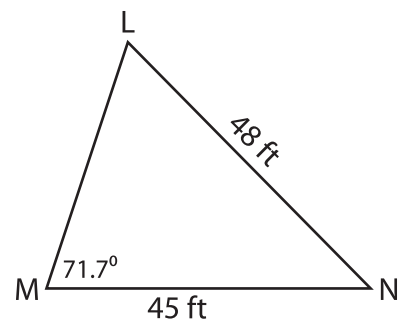


$m\angle P =$ _____

$m\angle Q =$ _____

$m\angle R =$ _____

4)



$m\angle L =$ _____

$m\angle N =$ _____

$n =$ _____