

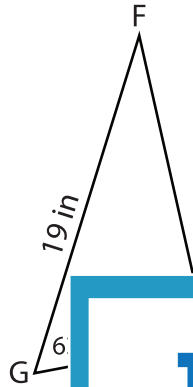
Name : _____

Solving Triangles

T1S2

Solve each triangle from the given measurements. Round your answer to the nearest tenth.

1)

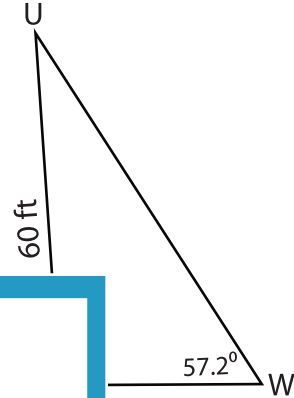


$m\angle F =$ _____

$m\angle H =$ _____

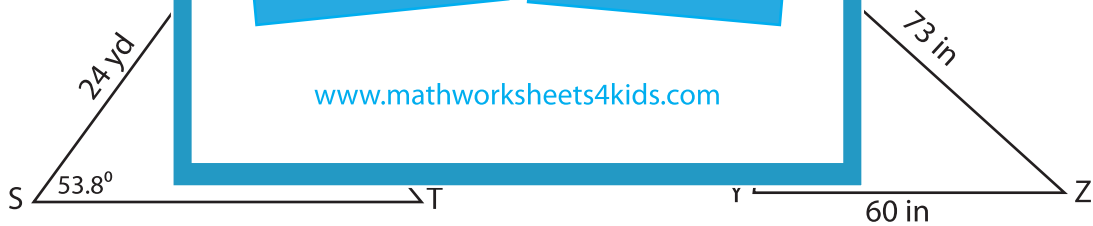
$g =$ _____

2)



$m\angle W =$ _____

3)



$m\angle R =$ _____

$m\angle T =$ _____

$r =$ _____

$m\angle X =$ _____

$m\angle Y =$ _____

$m\angle Z =$ _____

PREVIEW

Gain complete access to the largest collection of worksheets in all subjects!

Members, please log in to download this worksheet.

Not a member? Please sign up to gain complete access.

www.mathworksheets4kids.com