

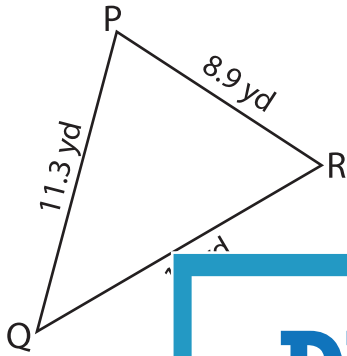
Name : \_\_\_\_\_

## Solving Triangles

T153

Solve each triangle from the given measurements. Round your answer to the nearest tenth.

1)

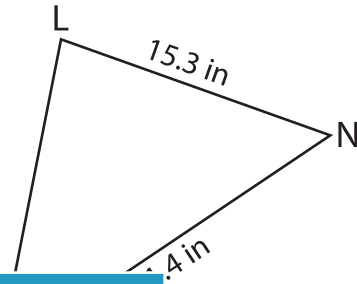


$m\angle P =$  \_\_\_\_\_

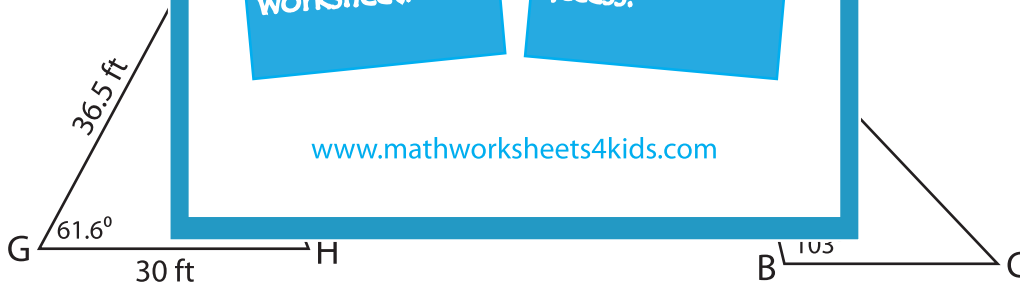
$m\angle Q =$  \_\_\_\_\_

$m\angle R =$  \_\_\_\_\_

2)



3)



$m\angle F =$  \_\_\_\_\_

$m\angle H =$  \_\_\_\_\_

$g =$  \_\_\_\_\_

$m\angle C =$  \_\_\_\_\_

$a =$  \_\_\_\_\_

$b =$  \_\_\_\_\_

# PREVIEW

Gain complete access to the largest collection of worksheets in all subjects!

Members, please log in to download this worksheet.

Not a member? Please sign up to gain complete access.

[www.mathworksheets4kids.com](http://www.mathworksheets4kids.com)