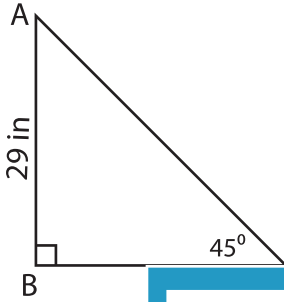


# Missing Sides

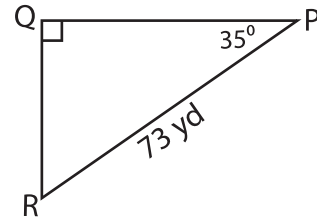
Find the measure of each indicated side. Round the answer to the nearest tenth.

1)

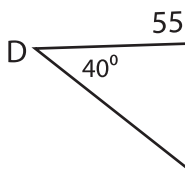


AC = \_\_\_\_\_

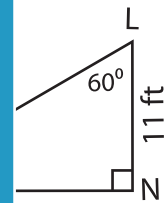
2)



3)

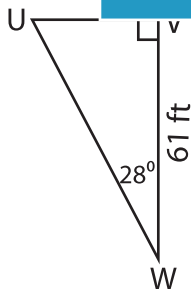


EF = \_\_\_\_\_

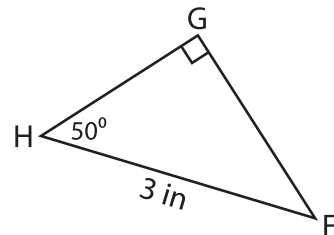


Find the perimeter

5)



Perimeter = \_\_\_\_\_



Perimeter = \_\_\_\_\_

## PREVIEW

Gain complete access to the largest collection of worksheets in all subjects!

Members, please log in to download this worksheet.

Not a member? Please sign up to gain complete access.

www.mathworksheets4kids.com