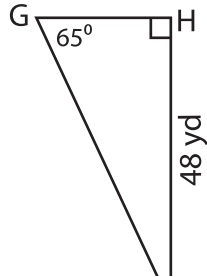


Missing Sides

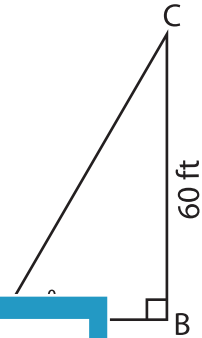
Find the measure of each indicated side. Round the answer to the nearest tenth.

1)



GI = _____

2)

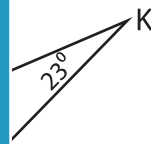


AB = _____

3)



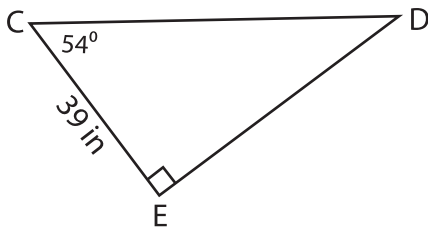
PR = _____



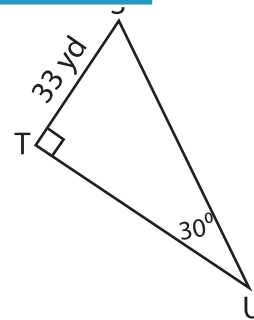
LM = _____

Find the perimeter

5)



Perimeter = _____



Perimeter = _____

PREVIEW

Gain complete access to the largest collection of worksheets in all subjects!

Members, please log in to download this worksheet.

Not a member? Please sign up to gain complete access.

www.mathworksheets4kids.com