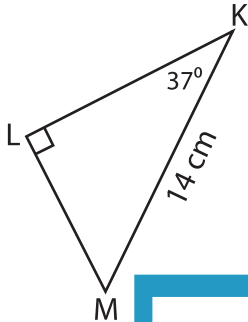


# Missing Sides

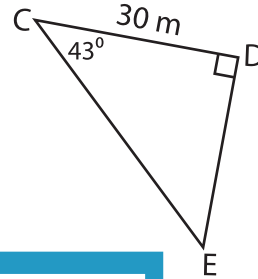
Find the measure of each indicated side. Round the answer to the nearest tenth.

1)



LM = \_\_\_\_\_

2)



3)

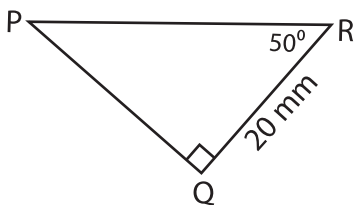


AB = \_\_\_\_\_

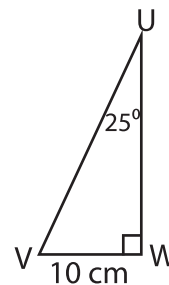


Find the perimeter

5)



Perimeter = \_\_\_\_\_



Perimeter = \_\_\_\_\_

## PREVIEW

Gain complete access to the largest collection of worksheets in all subjects!

Members, please log in to download this worksheet.

Not a member? Please sign up to gain complete access.

[www.mathworksheets4kids.com](http://www.mathworksheets4kids.com)