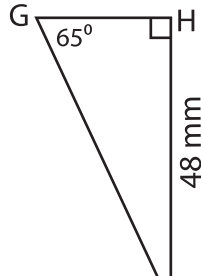


Missing Sides

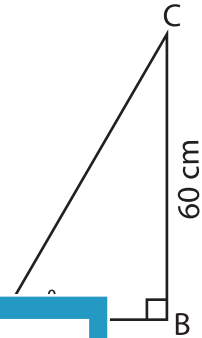
Find the measure of each indicated side. Round the answer to the nearest tenth.

1)



GI = _____

2)



AC = _____

3)



PR = _____

Gain complete access to the largest collection of worksheets in all subjects!

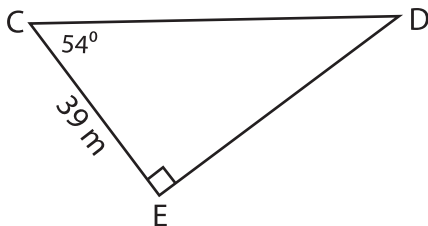
Members, please log in to download this worksheet.

Not a member? Please sign up to gain complete access.

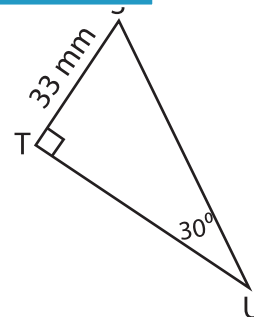
www.mathworksheets4kids.com

Find the perimeter

5)



Perimeter = _____



Perimeter = _____