

Venn Diagram

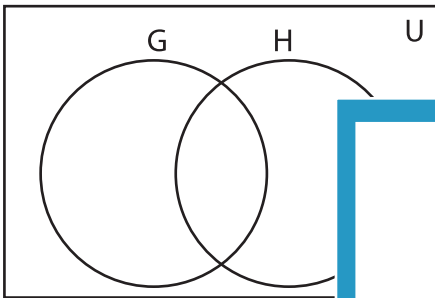
L2S3

Complete the Venn diagram.

1) $U = \{1, 5, 9, 10, 12, 16, 23, 30, 32, 37, 40, 41\}$

$G' = \{1, 5, 10, 16, 37, 40\}$

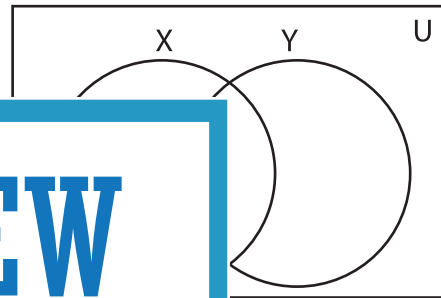
$H' = \{5, 9, 10, 12, 30, 41\}$



2) $U = \{2, 4, 6, 7, 11, 14, 20, 21, 24, 36, 40, 43, 46\}$

$X = \{2, 4, 6, 24, 36, 43, 46\}$

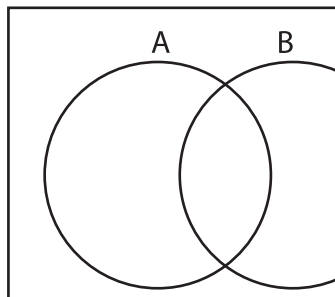
$Y = \{2, 6, 7, 14, 21, 46\}$



3) $A = \{1, 2, 8, 9, 11, 14, 22, 33, 34, 45, 49\}$

$A \cup B = \{1, 2, 3, 4, 8, 9, 11, 15, 17, 26, 28, 33, 34, 45, 49\}$

$B \cap A = \{8, 9, 11, 22\}$



Gain complete access to the largest collection of worksheets in all subjects!

Members, please log in to download this worksheet.

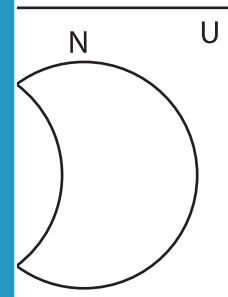
Not a member? Please sign up to gain complete access.

www.mathworksheets4kids.com

$B = \{15, 17, 26, 28, 33, 34, 38, 45, 49\}$

$B \cap A = \{33, 34, 45\}$

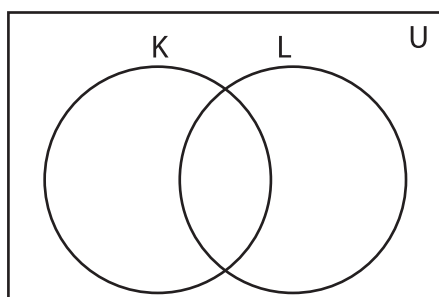
$B \cap A = \{33, 49\}$



5) $U = \{2, 4, 6, 7, 10, 15, 24, 29, 48\}$

$K = \{4, 7, 10, 15, 24, 48\}$

$L' = \{2, 7, 15, 24, 29, 48\}$



$Q \cap P = \{1, 23, 31\}$

$P \cup Q = \{1, 3, 5, 8, 9, 13, 18, 19, 23, 25, 27, 31, 50\}$

