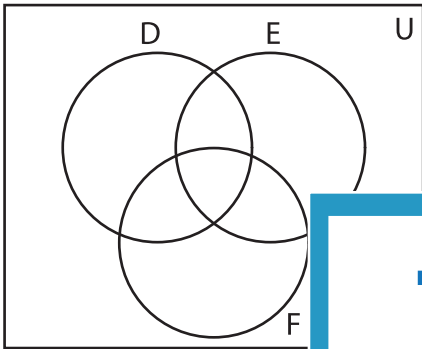


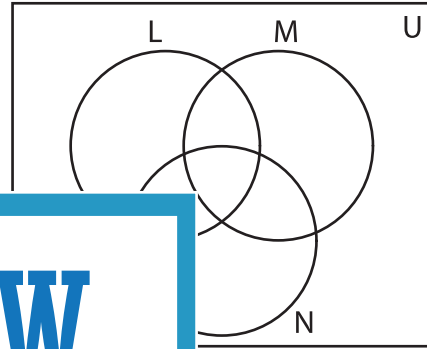
**Venn Diagram**

Complete the Venn diagram.

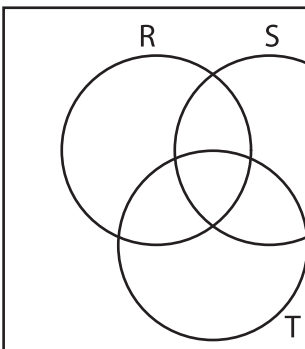
- 1)  $U = \{21, 29, 32, 35, 38, 39, 46\}$   
 $D = \{35, 38, 39, 46\}$   
 $E = \{21, 32, 39, 46\}$   
 $F = \{21, 29, 35, 39\}$




- 2)  $U = \{5, 8, 13, 17, 20, 24, 26, 37, 49\}$   
 $L = \{5, 8, 13, 17, 49\}$   
 $M = \{13, 17, 24, 26, 49\}$   
 $N = \{8, 17, 24, 37, 49\}$



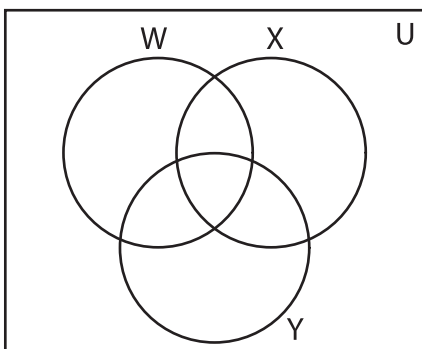
- 3)  $U = \{1, 6, 18, 25, 30, 34, 36, 43, 48, 50\}$   
 $R = \{1, 18, 25, 34, 36, 48\}$   
 $S = \{18, 30, 36, 50\}$   
 $T = \{18, 34, 43, 50\}$



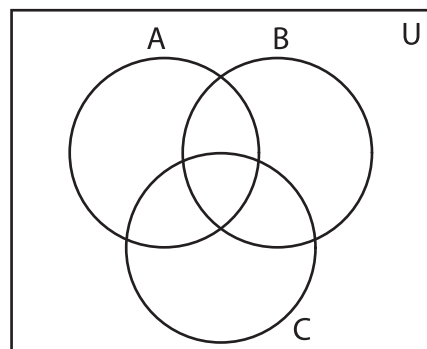
- $G = \{33, 40, 41, 42, 47\}$   
 $H = \{33, 40, 41, 42, 47\}$



- 5)  $U = \{3, 7, 10, 14, 27, 31, 37, 49\}$   
 $W = \{3, 27, 44\}$   
 $X = \{10, 27, 31\}$   
 $Y = \{3, 14, 31\}$



- $B = \{2, 7, 9, 15, 17, 43\}$   
 $C = \{2, 7, 9, 15, 19, 49\}$



**PREVIEW**

Gain complete access to the largest collection of worksheets in all subjects!

Members, please log in to download this worksheet.

Not a member? Please sign up to gain complete access.

[www.mathworksheets4kids.com](http://www.mathworksheets4kids.com)