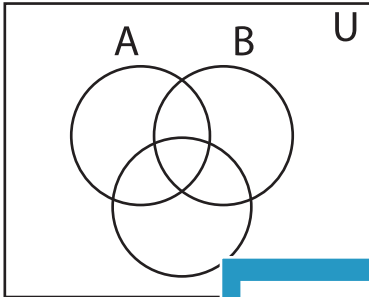


## Shading - Venn Diagram

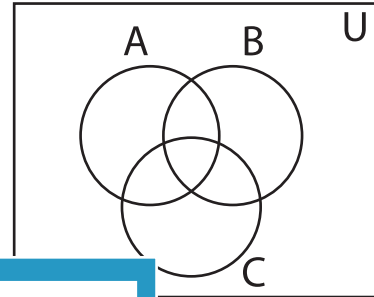
L1S4

Shade the given region.


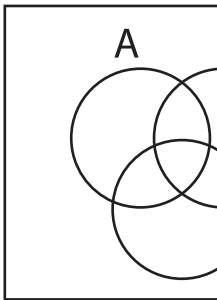
1)  $(B' \cap C)'$




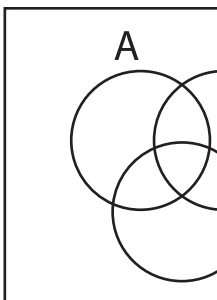
2)  $B \cup C'$



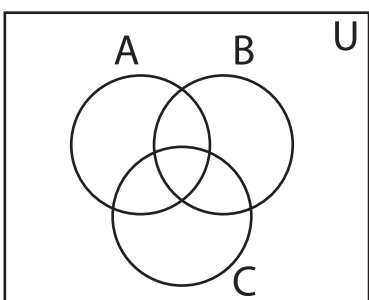
3)  $B \cap C'$



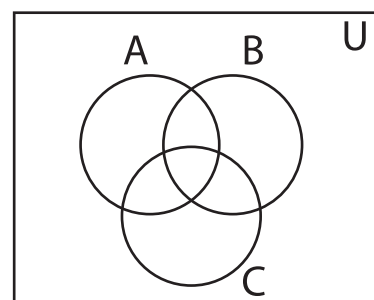
5)  $(A' \cup C)'$



7)  $B' \cap C'$



8)  $(A' \cup C)'$



# PREVIEW

Gain complete access to the largest  
collection of worksheets in all subjects!

Members, please  
log in to  
download this  
worksheet.

Not a member?  
Please sign up to  
gain complete  
access.

[www.mathworksheets4kids.com](http://www.mathworksheets4kids.com)