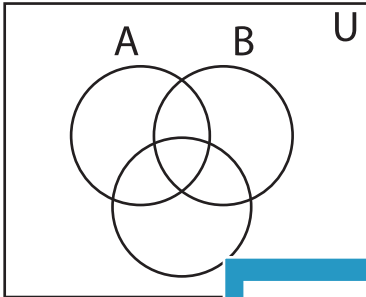


Shading - Venn Diagram

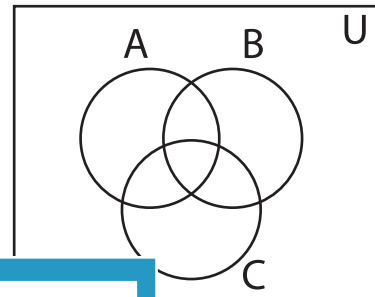
L2S2

Shade the given region.

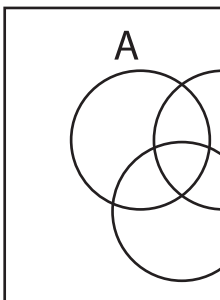
1) $C - A'$



2) C'

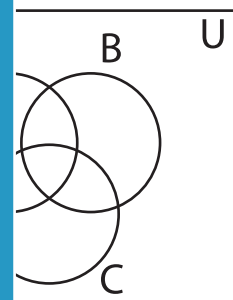


3) $A' - B$

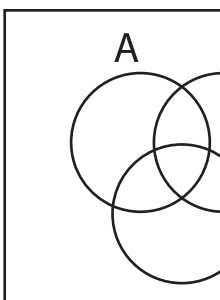


PREVIEW

Gain complete access to the largest
collection of worksheets in all subjects!

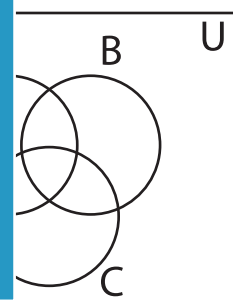


5) $B' \cap C'$

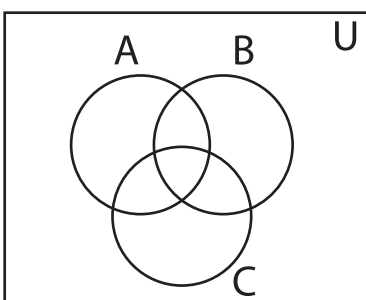


Members, please
log in to
download this
worksheet.

Not a member?
Please sign up to
gain complete
access.



7) $(C - B)'$



8) $A \cup B'$

