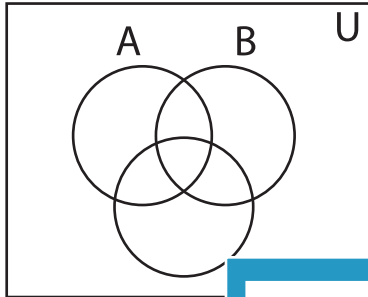


Shading - Venn Diagram

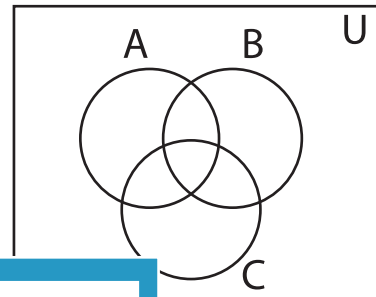
L3S1

Shade the given region.

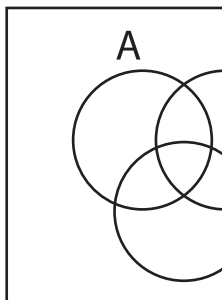
1) $(B - C) \cup A'$



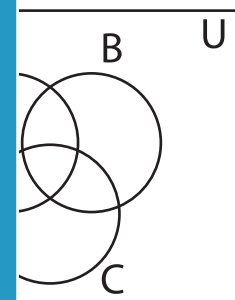
2) $C' \cap (B' - A)$



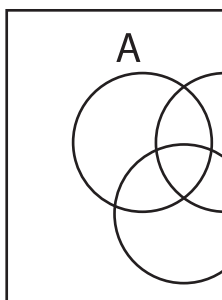
3) $A \cap (B \cup C)$



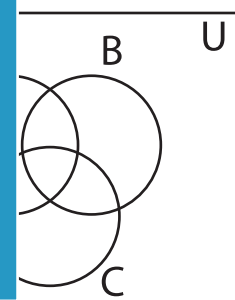
4) $(B - C)$



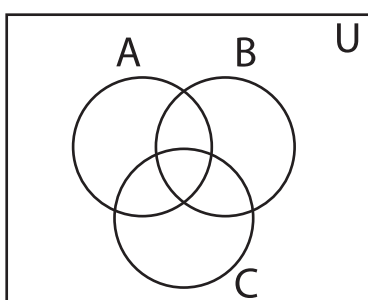
5) $(B - A)' - C$



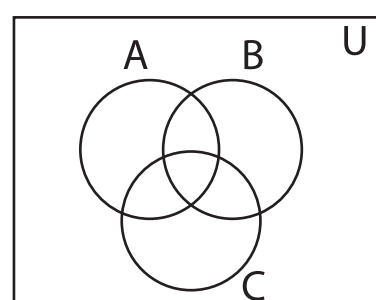
6) $(A \cap C)'$



7) $A' \cup (A' \cap C)$



8) $(B' \cup A) - (C \cap A)$



PREVIEW

Gain complete access to the largest
collection of worksheets in all subjects!

Members, please
log in to
download this
worksheet.

Not a member?
Please sign up to
gain complete
access.

www.mathworksheets4kids.com