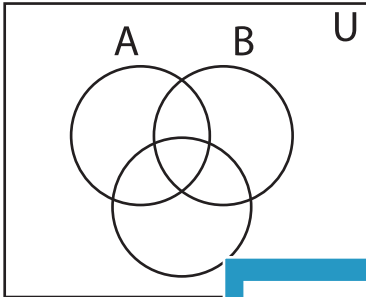


## Shading - Venn Diagram

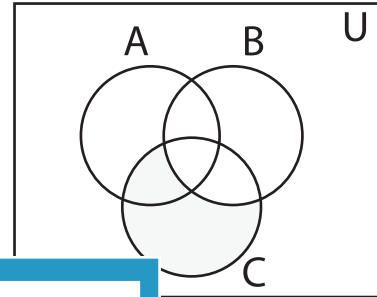
L3S5

Shade the given region.

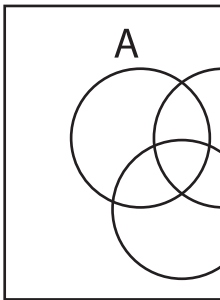
1)  $B \cup (B' - C)$



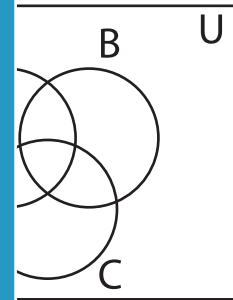
2)  $(C - B)' - (A' \cup B')$



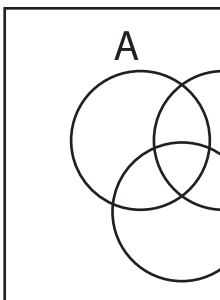
3)  $A \cup (B \cap C)$



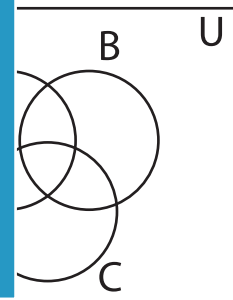
4)  $(A - C)$



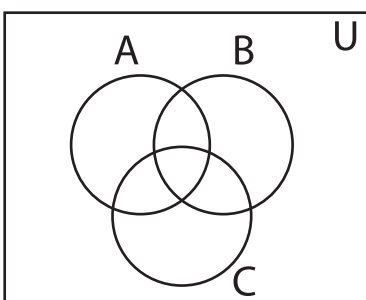
5)  $(B' \cap C)' - (A \cap B)$



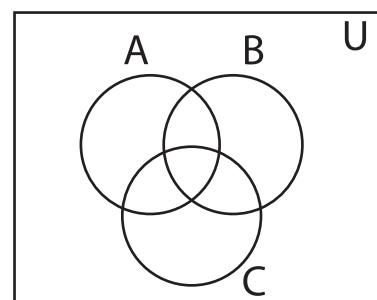
6)  $(A - B)'$



7)  $(A \cup B) \cup (B \cap C)'$



8)  $(A' \cap C)' - (A \cup B)'$



# PREVIEW

Gain complete access to the largest  
collection of worksheets in all subjects!

Members, please  
log in to  
download this  
worksheet.

Not a member?  
Please sign up to  
gain complete  
access.

[www.mathworksheets4kids.com](http://www.mathworksheets4kids.com)