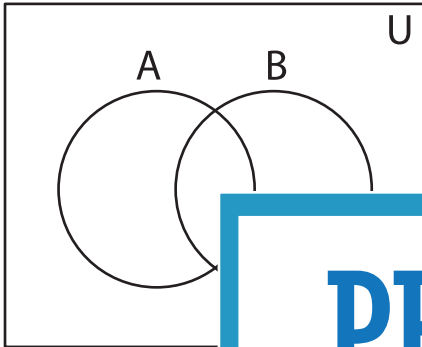


Shading - Venn Diagram

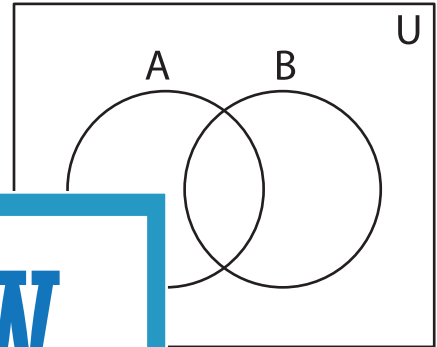
L1S5

Shade the given region.

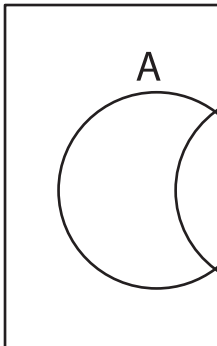
1) $(A' \cup B)'$



2) $(B \cap B)'$



3) $(B)'$



PREVIEW

Gain complete access to the largest
collection of worksheets in all subjects!

Members, please
log in to
download this
worksheet.

Not a member?
Please sign up to
gain complete
access.

www.mathworksheets4kids.com

5) $B' \cup (A)'$

