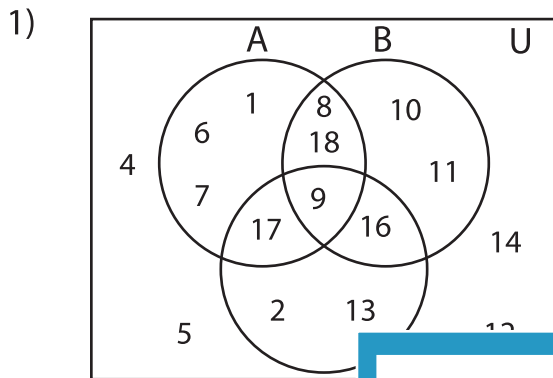


Venn Diagram

L1S4

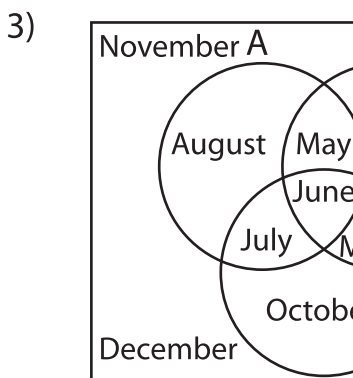
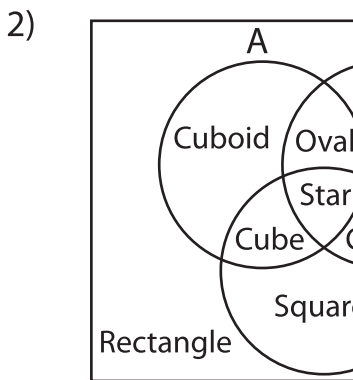
Perform the below mention boolean algebraic operation for the given set of elements.



i) $B' \cup C =$ _____

ii) $B' =$ _____

iii) $A \cup C =$ _____



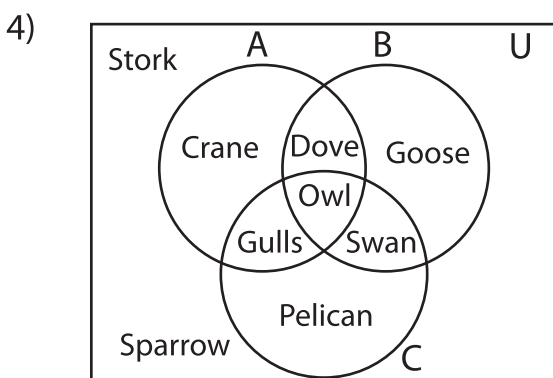
PREVIEW

Gain complete access to the largest collection of worksheets in all subjects!

Members, please log in to download this worksheet.

Not a member? Please sign up to gain complete access.

www.mathworksheets4kids.com



i) $B \cap C =$ _____

ii) $A \cap B' =$ _____

iii) $A =$ _____