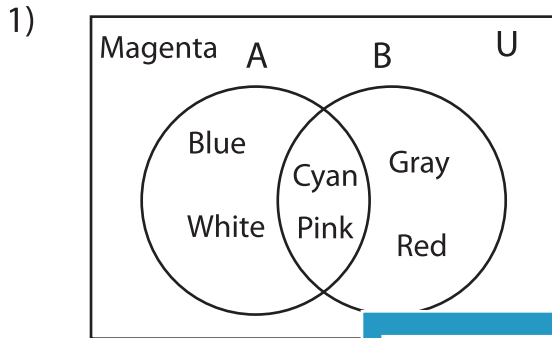


Venn Diagram

L1S3

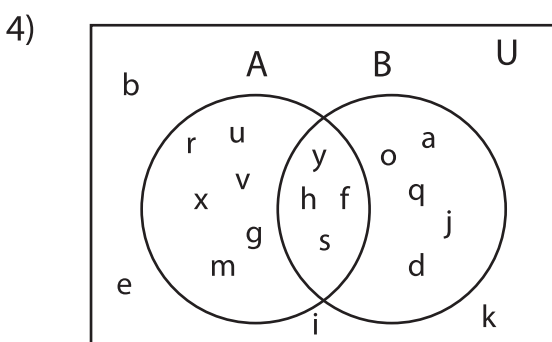
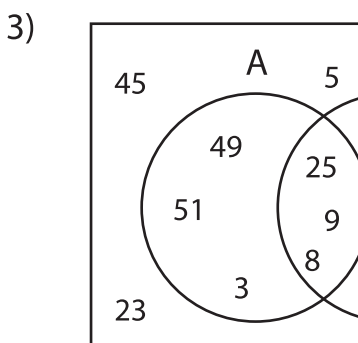
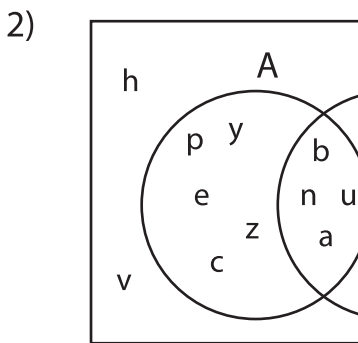
Perform the below mention boolean algebraic operation for the given set of elements.



i) $A \cap B =$ _____

ii) $A =$ _____

iii) $A' =$ _____



i) $A' \cup B' =$ _____

ii) $A \cap B' =$ _____

iii) $A' \cap B =$ _____

PREVIEW

Gain complete access to the largest collection of worksheets in all subjects!

Members, please log in to download this worksheet.

Not a member? Please sign up to gain complete access.

www.mathworksheets4kids.com
