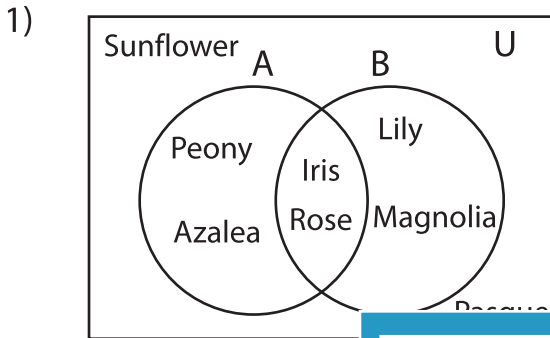


Venn Diagram

L2S2

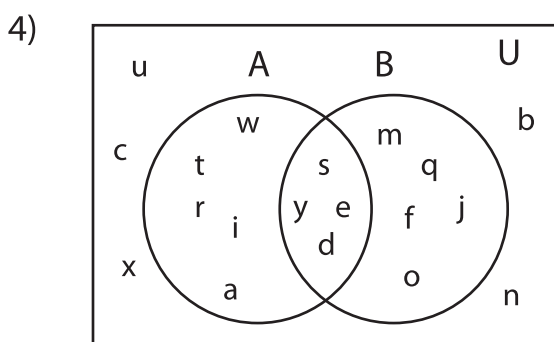
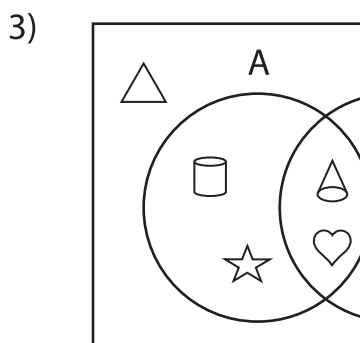
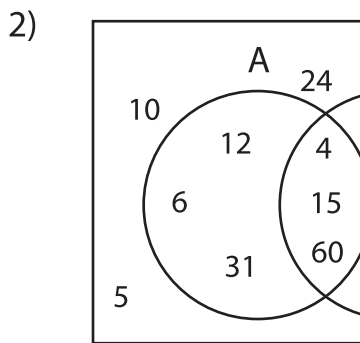
Perform the below mention boolean algebraic operation for the given set of elements.



i) $(A \cup B)'$ = _____

ii) $B - A'$ = _____

iii) $B - A$ = _____



i) $A - B$ = _____

ii) $A' \cap B$ = _____

iii) B' = _____

PREVIEW

Gain complete access to the largest collection of worksheets in all subjects!

Members, please log in to download this worksheet.

Not a member? Please sign up to gain complete access.

www.mathworksheets4kids.com
