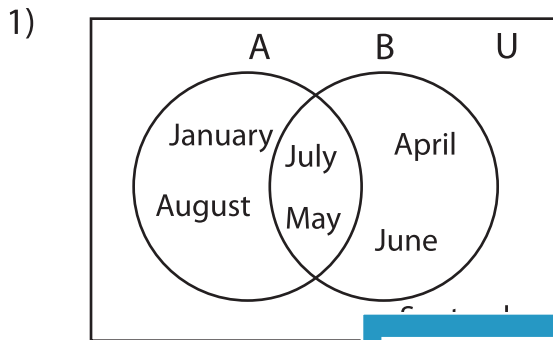


Venn Diagram

L2S3

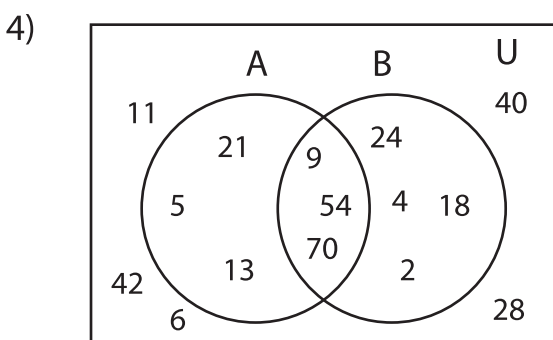
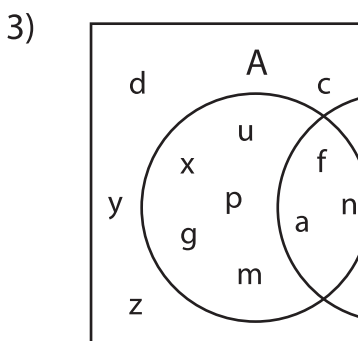
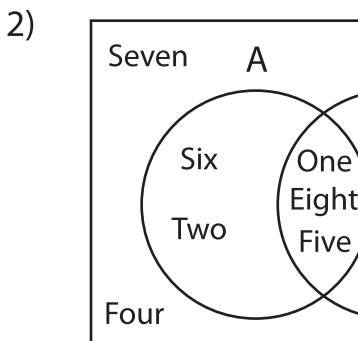
Perform the below mention boolean algebraic operation for the given set of elements.



i) $B - A'$ = _____

ii) $A \cap B'$ = _____

iii) $(A - B)'$ = _____



i) $(A \cup B)'$ = _____

ii) $A' - B'$ = _____

iii) A = _____

PREVIEW

Gain complete access to the largest collection of worksheets in all subjects!

Members, please log in to download this worksheet.

Not a member? Please sign up to gain complete access.

www.mathworksheets4kids.com
