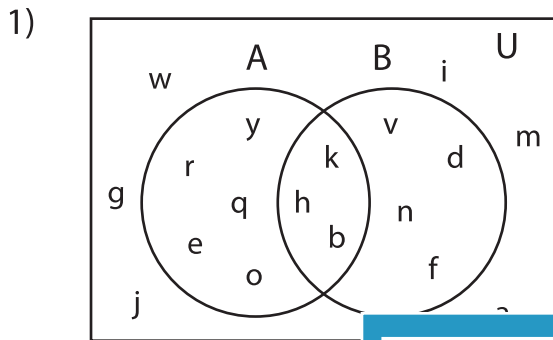


**Venn Diagram**

L2S4

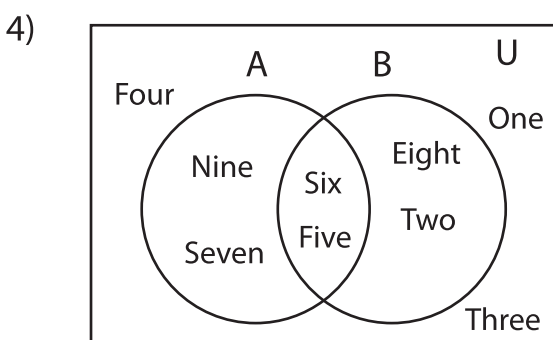
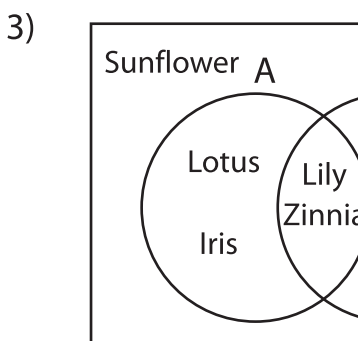
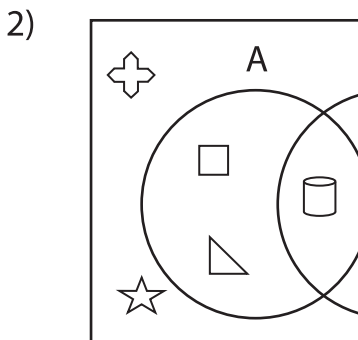
Perform the below mention boolean algebraic operation for the given set of elements.



i)  $B' - A'$  = \_\_\_\_\_

ii)  $A \cap B'$  = \_\_\_\_\_

iii)  $B' - A$  = \_\_\_\_\_



i)  $B$  = \_\_\_\_\_

ii)  $A - B$  = \_\_\_\_\_

iii)  $A'$  = \_\_\_\_\_

**PREVIEW**

Gain complete access to the largest collection of worksheets in all subjects!

Members, please log in to download this worksheet.

Not a member? Please sign up to gain complete access.

[www.mathworksheets4kids.com](http://www.mathworksheets4kids.com)

---

---

---

---

---

---

---

---