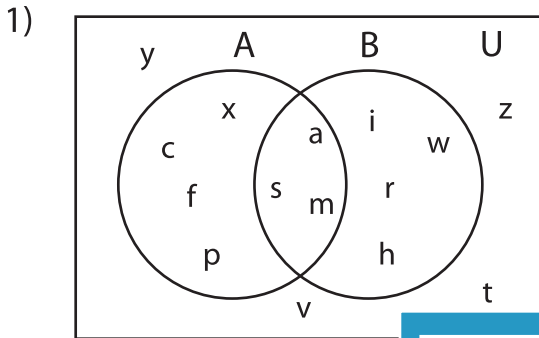


Venn Diagram

L3S3

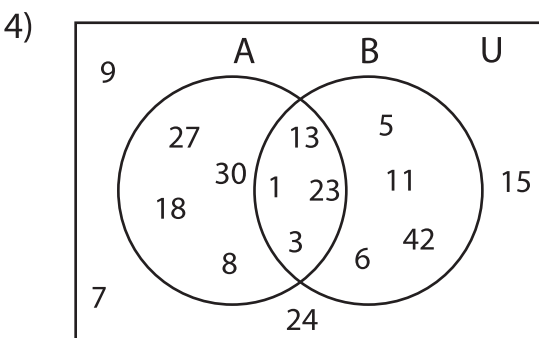
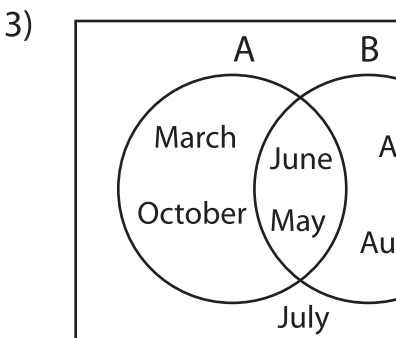
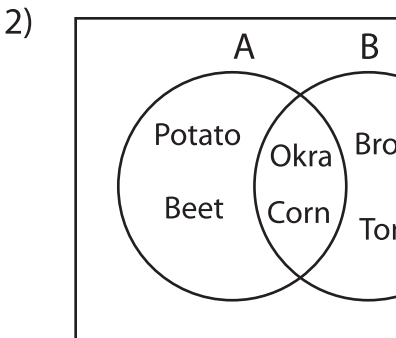
Perform the below mention boolean algebraic operation for the given set of elements.



i) $(A' \cap B) \cap (B \cup A')$ = _____

ii) $(A - B) \cup (B - A')$ = _____

iii) $(A \cup B) - (B \cap A)$ = _____



i) $(B \cap A)' - (A' \cap B')$ = _____

ii) $(B - A') \cup (A' - B)$ = _____

iii) $(A - B)' \cap (A \cup A')$ = _____

PREVIEW

Gain complete access to the largest collection of worksheets in all subjects!

Members, please log in to download this worksheet.

Not a member? Please sign up to gain complete access.

www.mathworksheets4kids.com
