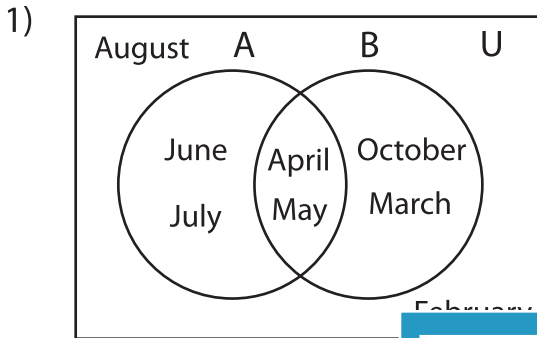


Venn Diagram

L3S4

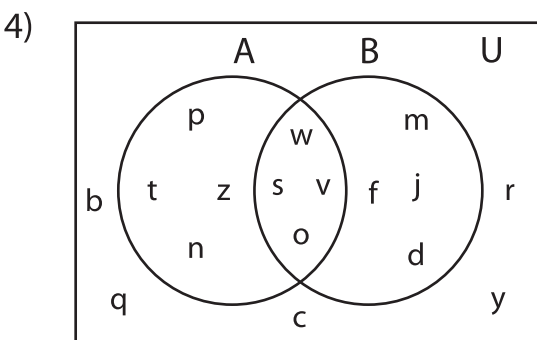
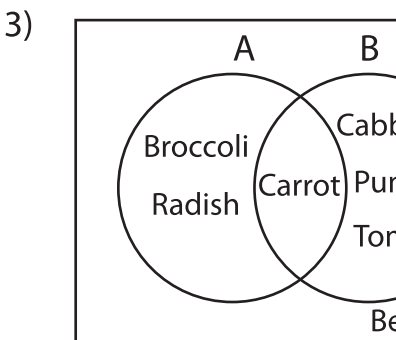
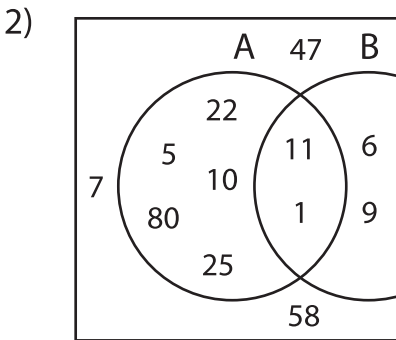
Perform the below mention boolean algebraic operation for the given set of elements.



i) $(B - A') \cup (B - A) =$ _____

ii) $(A \cup B') - (A \cup B) =$ _____

iii) $A \cup (A \cap B) =$ _____



i) $(A' \cup B) \cap (A - B') =$ _____

ii) $A' \cap (A' - B) =$ _____

iii) $(A \cup B)' \cup (A \cap B)' =$ _____

PREVIEW

Gain complete access to the largest collection of worksheets in all subjects!

Members, please log in to download this worksheet.

Not a member? Please sign up to gain complete access.

www.mathworksheets4kids.com
