


Name : \_\_\_\_\_

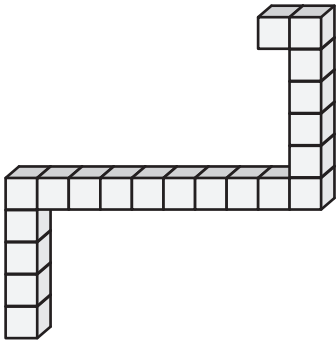
## Counting Cubes - Solid Blocks

ES1

Count the unit cubes and find the volume of each solid block.

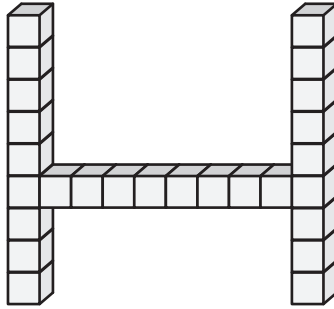
 = 1 in<sup>3</sup>

1)



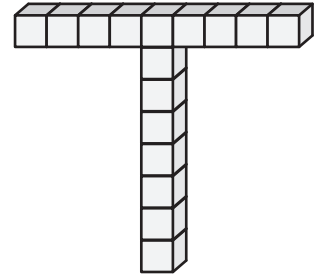
Volume = \_\_\_\_\_

2)



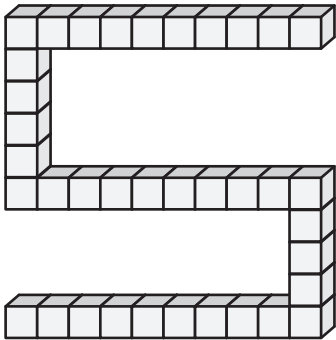
Volume = \_\_\_\_\_

3)



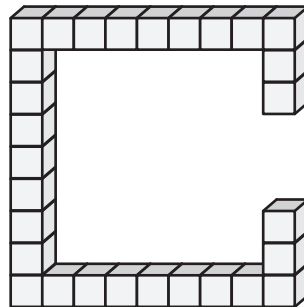
Volume = \_\_\_\_\_

4)



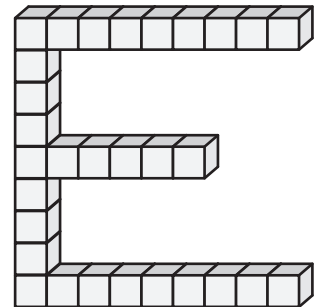
Volume = \_\_\_\_\_

5)



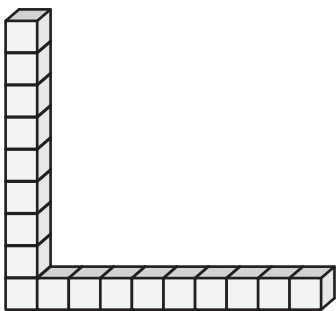
Volume = \_\_\_\_\_

6)




Volume = \_\_\_\_\_

7)




Volume = \_\_\_\_\_

8)



Volume = \_\_\_\_\_

9)



Volume = \_\_\_\_\_