


Name : \_\_\_\_\_

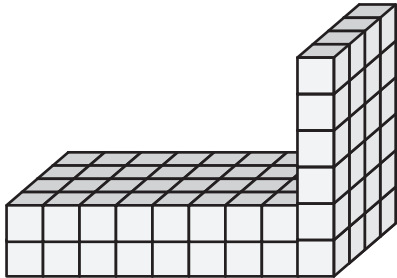
## Counting Cubes - Solid Blocks

MS3

Count the unit cubes and find the volume of each solid block.


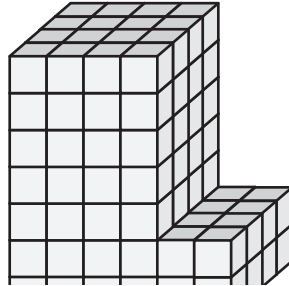
 = 1 in<sup>3</sup>

1)



Volume = \_\_\_\_\_


2)



3)

Volume = \_\_\_\_\_

4)



Volume = \_\_\_\_\_

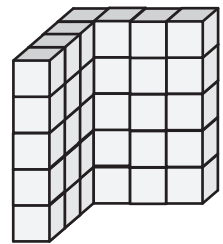
**PREVIEW**

Gain complete access to the largest collection of worksheets in all subjects!

Members, please log in to download this worksheet.

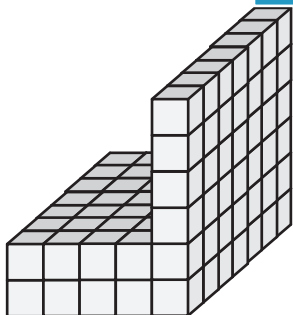
Not a member? Please sign up to gain complete access.

[www.mathworksheets4kids.com](http://www.mathworksheets4kids.com)




Volume = \_\_\_\_\_

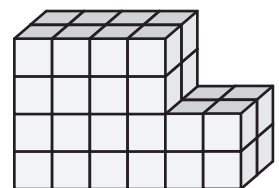
7)



Volume = \_\_\_\_\_



Volume = \_\_\_\_\_



Volume = \_\_\_\_\_