

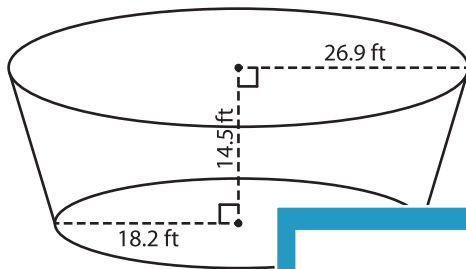
Name : \_\_\_\_\_

## Volume - Cone

MS2

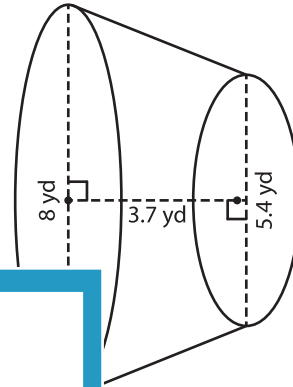
Find the volume of each conical frustum. Round your answer to two decimal places. (use  $\pi = 3.14$ )

1)



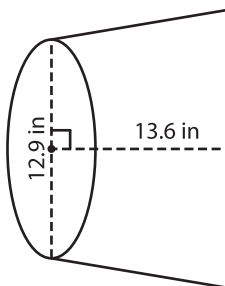
Volume = \_\_\_\_\_

2)



\_\_\_\_\_

3)



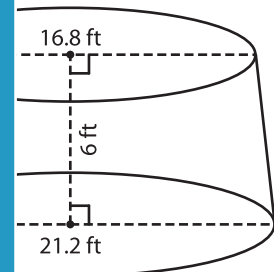
Volume = \_\_\_\_\_

**PREVIEW**  
Gain complete access to the largest collection of worksheets in all subjects!

Members, please log in to download this worksheet.

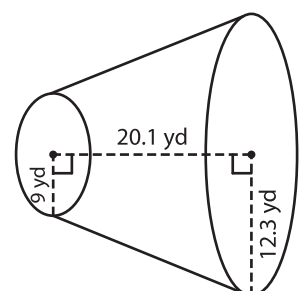
Not a member? Please sign up to gain complete access.

[www.mathworksheets4kids.com](http://www.mathworksheets4kids.com)



\_\_\_\_\_

5) The radii of the ends of a frustum of a cone are 9 yards and 12.3 yards. The height of the frustum is 20.1 yards. Find the volume of the frustum. Round your answer to two decimal places. (use  $\pi = 3.14$ )



\_\_\_\_\_