

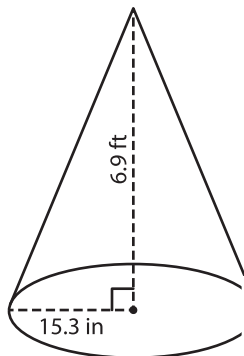
Name : _____

Volume - Cone

Decimals: DS1

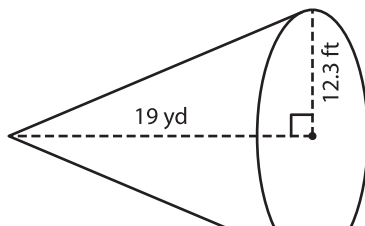
A) Find the volume of each cone. Round your answer to two decimal places.
(use $\pi = 3.14$)

1)



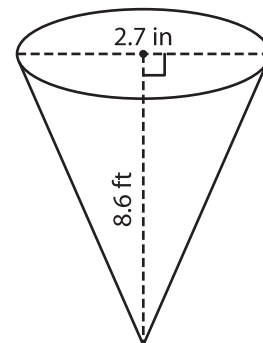
Volume = _____

2)



Volume = _____

3)



Volume = _____ in³

B) Find the volume of each cone. Round your answer to two decimal places.

4) height = 17.5 ft ; diameter = 10 ft

Volume = _____

6) diameter = 9 yd ; height = 12 ft

Volume = _____ yd³

PREVIEW
Gain complete access to the largest collection of worksheets in all subjects!

Members, please log in to download this worksheet.

Not a member? Please sign up to gain complete access.

www.mathworksheets4kids.com

Volume = _____ ft³

8) A conical water tank has a height of 4.9 yards and radius of 5.1 feet. How much water can the tank hold? Round your answer to two decimal places. (use $\pi = 3.14$)

_____ cubic yards