

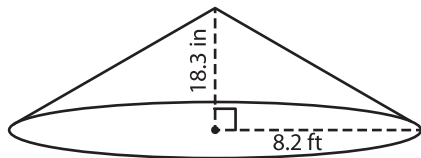
Name : _____

Volume - Cone

Decimals: DS4

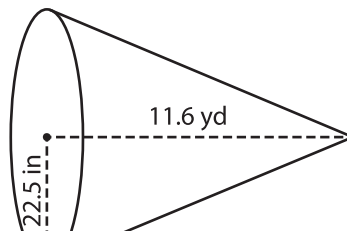
A) Find the volume of each cone. Round your answer to two decimal places.
(use $\pi = 3.14$)

1)



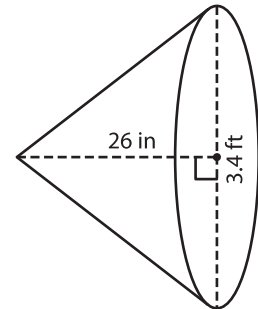
Volume = _____

2)



Volume = _____ in^3

3)



B) Find the volume of each cone. Round your answer to two decimal places.

Gain complete access to the largest collection of worksheets in all subjects!

4) height = 13.6 yd ; radius = 5.2 yd

5) height = 4.1 yd ; radius = 2.5 yd

6) diameter = 10.8 in ; height = 1.5 in

7) diameter = 20.8 in ; height = 3.2 in

Volume = _____

Volume = _____ yd^3

6) diameter = 10.8 in ; height = 1.5 in

Volume = _____ in^3

Volume = _____ ft^3

8) If the height and diameter of a snow cone cup are 0.38 feet and 3 inches respectively, what is the volume of the cup? Round your answer to two decimal places. (use $\pi = 3.14$)



_____ cubic inches