

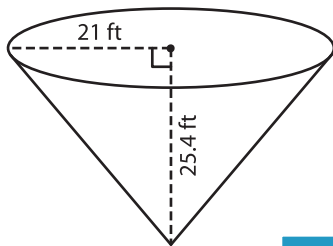
Name : _____

Decimals: ES6

Volume - Cone

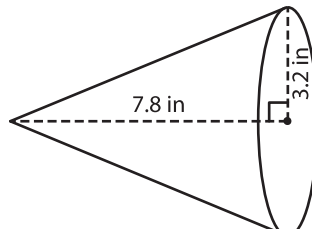
A) Find the volume of each cone. Round your answer to two decimal places.
(use $\pi = 3.14$)

1)



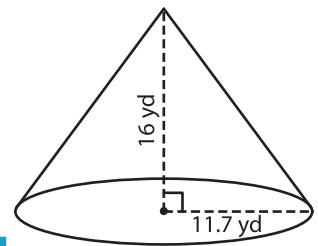
Volume = _____

2)



Volume = _____

3)



Volume = _____

B) Find the volume of each cone. Round your answer to two decimal places.

4) radius = 9.9 in ; height = 15.2 in

Volume = _____

6) height = 12.7 yd ; radius = 18 yd

Volume = _____

PREVIEW

Gain complete access to the largest collection of worksheets in all subjects!

Members, please log in to download this worksheet.

Not a member? Please sign up to gain complete access.

www.mathworksheets4kids.com

5) radius = 26 ft ; height = 18 ft

Volume = _____

height = 14.1 in

Volume = _____

8) A jewelry store uses wooden cones of height 4 inches to display rings. If the radius of the cone is 0.5 inches, how much wood is used in the cone? Round your answer to two decimal places. (use $\pi = 3.14$)

