

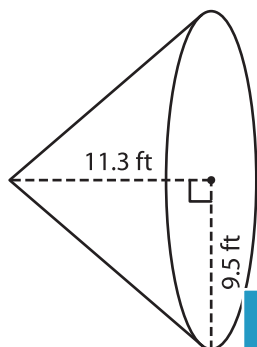
Name : _____

Volume - Cone

Decimals: MS4

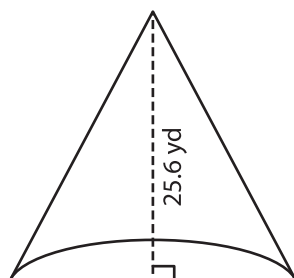
A) Find the volume of each cone. Round your answer to two decimal places.
(use $\pi = 3.14$)

1)



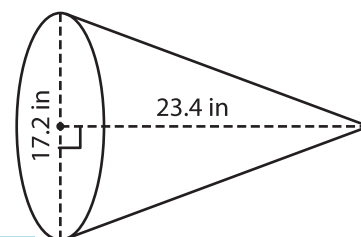
Volume = _____

2)



Volume = _____

3)



Volume = _____

B) Find the volume of each cone. Round your answer to two decimal places.

4) height = 18.5 in ; diameter = 10 in

Volume = _____

5) height = 24.1 ft ; diameter = 12 ft

Volume = _____

6) diameter = 22.4 yd ; height = 15 yd

Volume = _____

7) diameter = 6 in ; height = 8 in

Volume = _____

8) A cone-shaped pop corn holder has a height of 4.5 inches and diameter of 3.8 inches. What is the volume of the holder? Round your answer to two decimal places.
(use $\pi = 3.14$)

PREVIEW

Gain complete access to the largest collection of worksheets in all subjects!

Members, please log in to download this worksheet.

Not a member? Please sign up to gain complete access.

www.mathworksheets4kids.com