

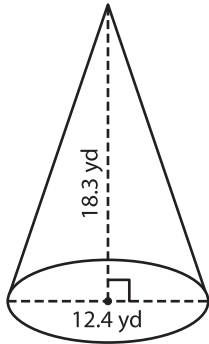
Name : _____

Decimals: MS6

Volume - Cone

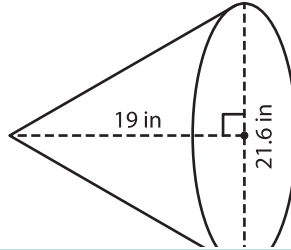
A) Find the volume of each cone. Round your answer to two decimal places.
(use $\pi = 3.14$)

1)



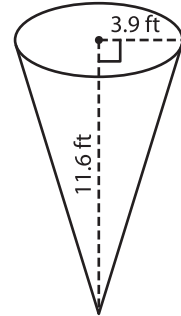
Volume = _____

2)



Volume = _____

3)



Volume = _____

B) Find the volume of each cone. Round your answer to two decimal places.

4) height = 29.7 ft ; radius = 10.5 ft

Volume = _____

6) radius = 16.8 in ; height = 21.6 in

Volume = _____

Gain complete access to the largest collection of worksheets in all subjects!

Members, please log in to download this worksheet.

Not a member? Please sign up to gain complete access.

www.mathworksheets4kids.com

5) Round your answer to two decimal places.

7) diameter = 13.2 yd ; height = 11.6 yd

Volume = _____

8) ; height = 13.8 ft ; radius = 10.5 ft

Volume = _____

8) The base of a spinning top is in the shape of a cone. The height is 1.5 inches and diameter 2 inches. Find the volume of the cone. (use $\pi = 3.14$)

