

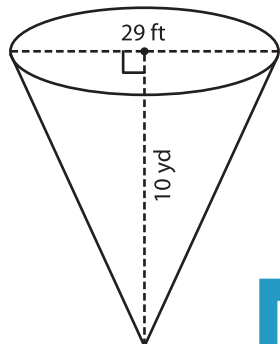
Name : _____

Volume - Cone

Integers: DS5

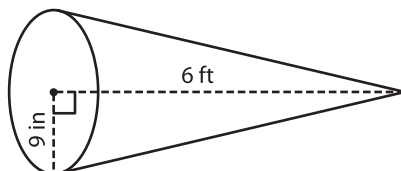
A) Find the volume of each cone. Round your answer to two decimal places.
(use $\pi = 3.14$)

1)



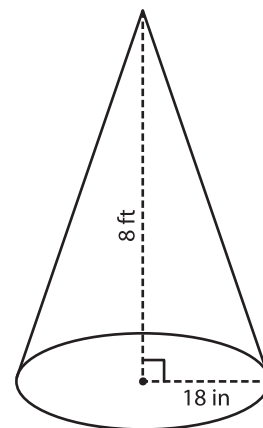
Volume = _____

2)



Volume = _____

3)



Volume = _____ in³

B) Find the volume of each cone. Round your answer to two decimal places.

4) diameter = 5 ft ; height = 10 ft

Volume = _____

6) height = 12 in ; diameter = 10 in

Volume = _____ yd³

PREVIEW
Gain complete access to the largest collection of worksheets in all subjects!

Members, please log in to download this worksheet.

Not a member? Please sign up to gain complete access.

www.mathworksheets4kids.com

Volume = _____ ft³

8) A metal steel is rolled in the shape of a cone. If the height of the cone is 1 foot and its radius 2 inches, find the volume of the cone. (use $\pi = 3.14$)

_____ cubic inches