

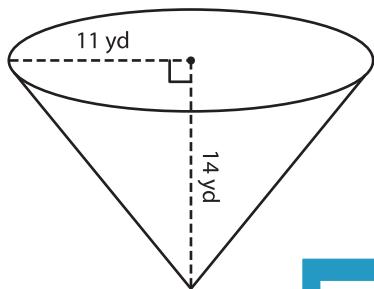
Name : _____

Volume - Cone

Integers: ES3

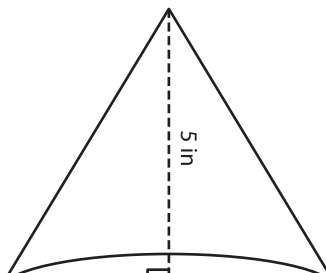
A) Find the volume of each cone. Round your answer to two decimal places.
(use $\pi = 3.14$)

1)



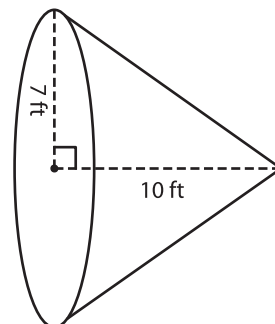
Volume = _____

2)



Volume = _____

3)



Volume = _____

B) Find the volume of each cone. Round your answer to two decimal places.

4) height = 13 yd ; radius = 10 yd

Volume = _____

6) radius = 20 ft ; height = 15 ft

Volume = _____

Volume = _____

PREVIEW
Gain complete access to the largest collection of worksheets in all subjects!

Members, please log in to download this worksheet.

Not a member? Please sign up to gain complete access.

www.mathworksheets4kids.com

8) A gas station has conical fire buckets hung in rows. The radius and the height of the buckets are 5 inches and 16 inches respectively. Find the volume of each bucket. Round your answer to two decimal places. (use $\pi = 3.14$)

